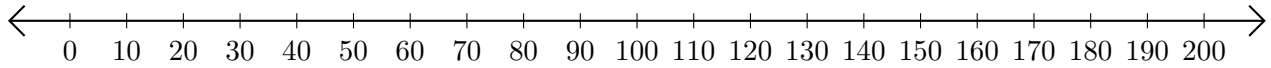


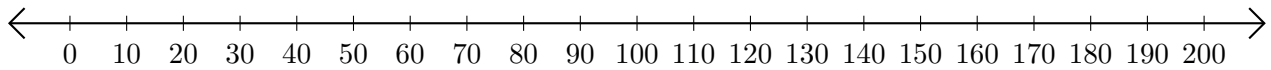
Adding on Number Lines (A)

Use the number lines to calculate each sum.

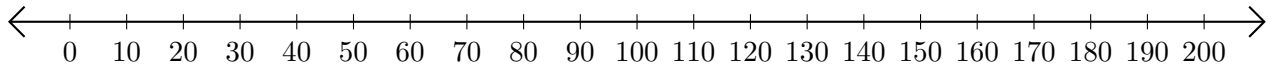
1. $70 + 120 = \underline{\hspace{2cm}}$



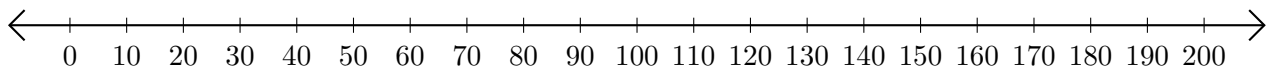
2. $40 + 90 = \underline{\hspace{2cm}}$



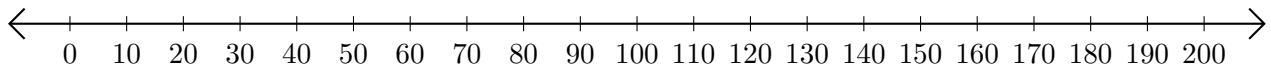
3. $10 + 50 = \underline{\hspace{2cm}}$



4. $170 + 30 = \underline{\hspace{2cm}}$



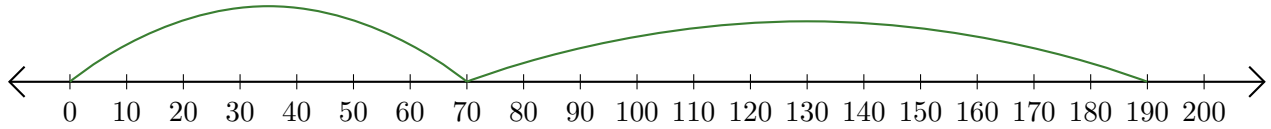
5. $50 + 30 = \underline{\hspace{2cm}}$



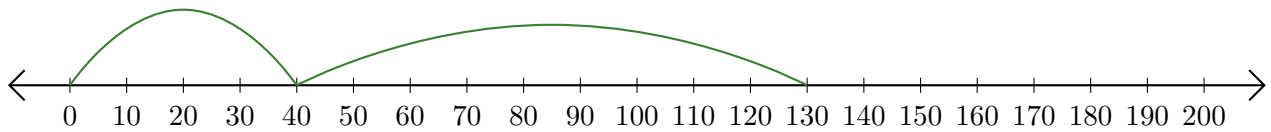
Adding on Number Lines (A) Answers

Use the number lines to calculate each sum.

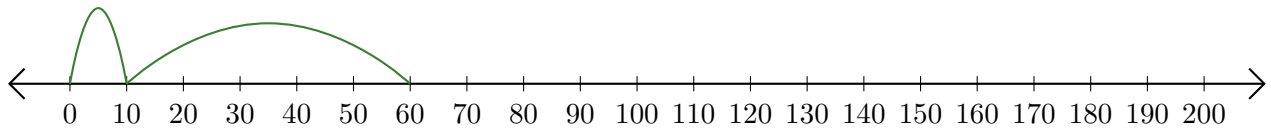
1. $70 + 120 = \underline{190}$



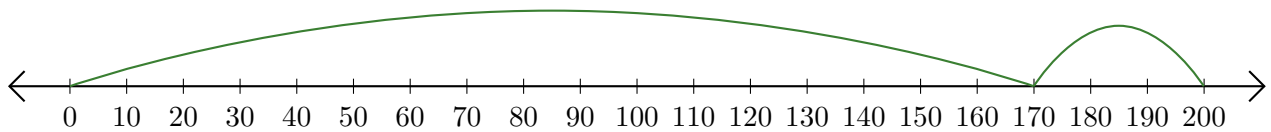
2. $40 + 90 = \underline{130}$



3. $10 + 50 = \underline{60}$



4. $170 + 30 = \underline{200}$



5. $50 + 30 = \underline{80}$

