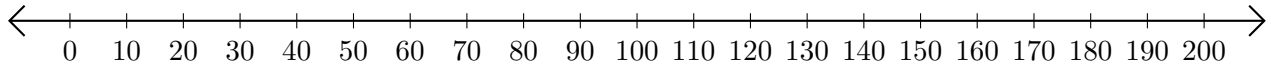


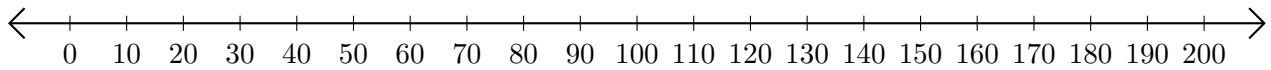
# Adding on Number Lines (A)

Use the number lines to calculate each sum.

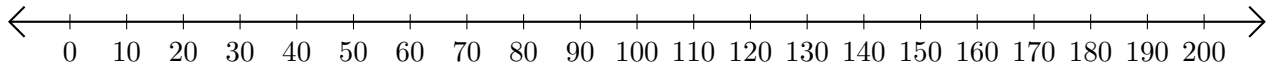
1.  $70 + 120 = \underline{\hspace{2cm}}$



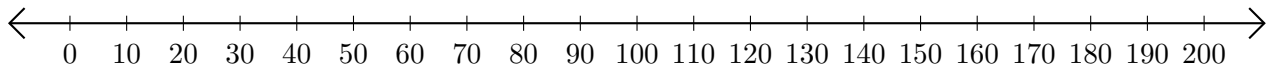
2.  $40 + 90 = \underline{\hspace{2cm}}$



3.  $10 + 50 = \underline{\hspace{2cm}}$



4.  $170 + 30 = \underline{\hspace{2cm}}$



5.  $50 + 30 = \underline{\hspace{2cm}}$

