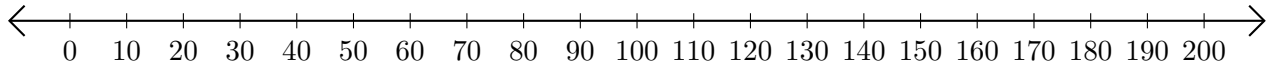


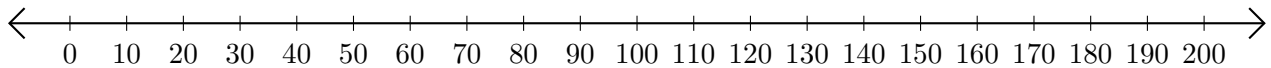
# Adding on Number Lines (H)

Use the number lines to calculate each sum.

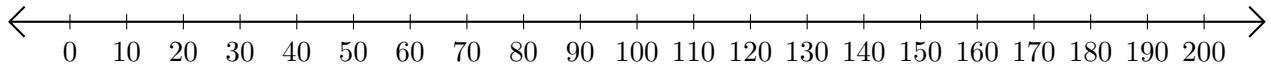
1.  $140 + 30 = \underline{\hspace{2cm}}$



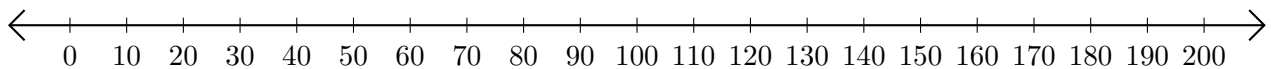
2.  $150 + 50 = \underline{\hspace{2cm}}$



3.  $90 + 70 = \underline{\hspace{2cm}}$



4.  $180 + 10 = \underline{\hspace{2cm}}$



5.  $100 + 90 = \underline{\hspace{2cm}}$

