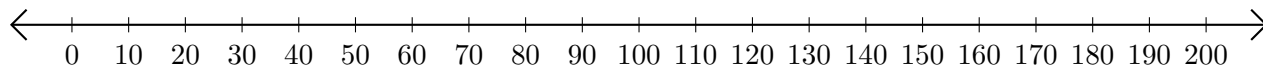


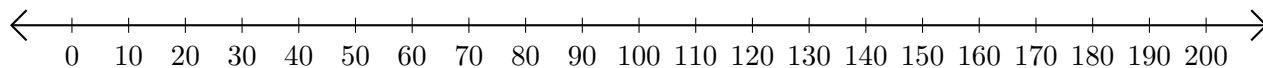
# Adding on Number Lines (I)

Use the number lines to calculate each sum.

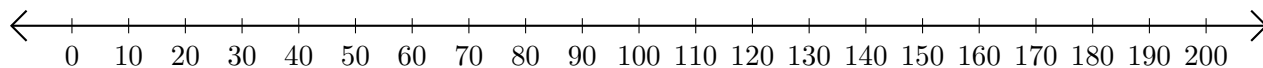
1.  $130 + 40 = \underline{\hspace{2cm}}$



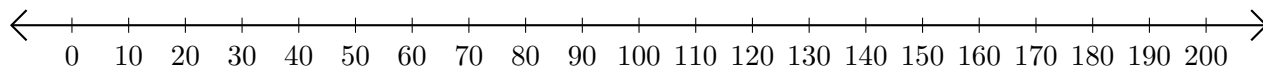
2.  $190 + 10 = \underline{\hspace{2cm}}$



3.  $170 + 20 = \underline{\hspace{2cm}}$



4.  $60 + 40 = \underline{\hspace{2cm}}$



5.  $40 + 150 = \underline{\hspace{2cm}}$

