

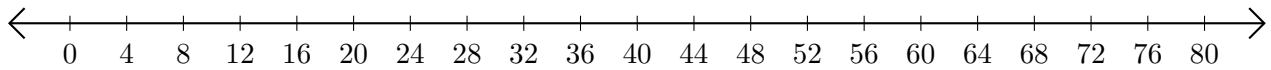
# Adding on Number Lines (A)

Use the number lines to calculate each sum.

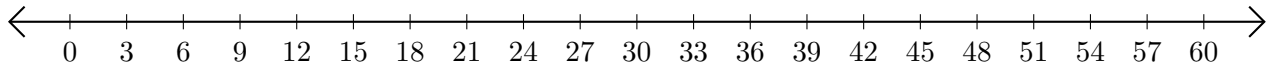
1.  $45 + 5 = \underline{\quad}$



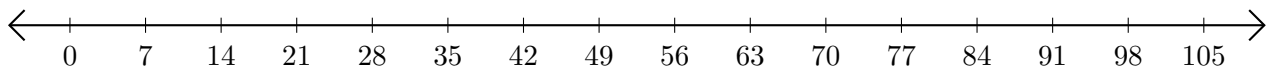
2.  $36 + 40 = \underline{\quad}$



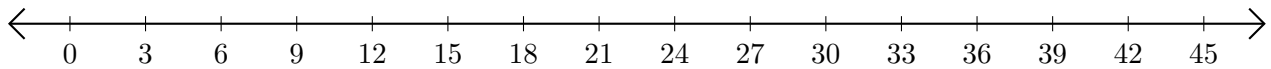
3.  $42 + 9 = \underline{\quad}$



4.  $42 + 56 = \underline{\quad}$



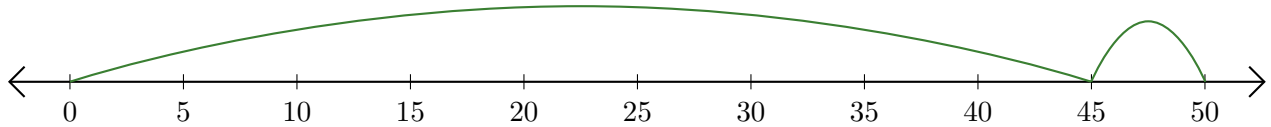
5.  $24 + 12 = \underline{\quad}$



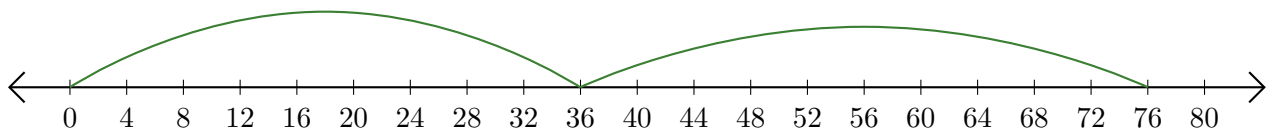
# Adding on Number Lines (A) Answers

Use the number lines to calculate each sum.

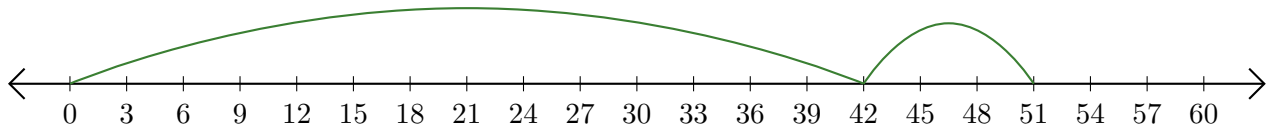
1.  $45 + 5 = \underline{50}$



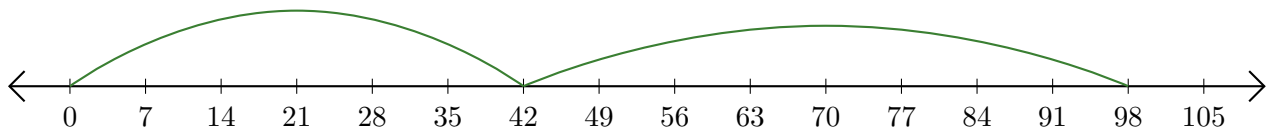
2.  $36 + 40 = \underline{76}$



3.  $42 + 9 = \underline{51}$



4.  $42 + 56 = \underline{98}$



5.  $24 + 12 = \underline{36}$

