

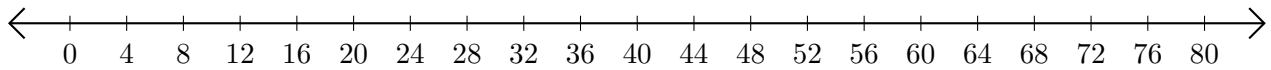
Adding on Number Lines (A)

Use the number lines to calculate each sum.

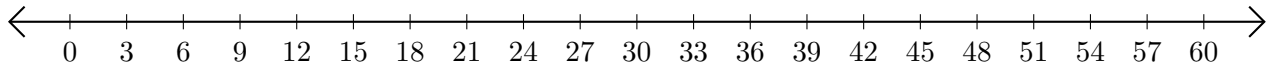
1. $45 + 5 = \underline{\quad}$



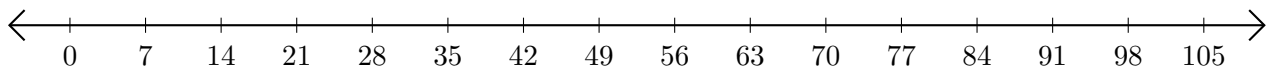
2. $36 + 40 = \underline{\quad}$



3. $42 + 9 = \underline{\quad}$



4. $42 + 56 = \underline{\quad}$



5. $24 + 12 = \underline{\quad}$

