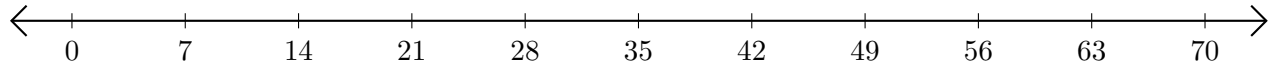


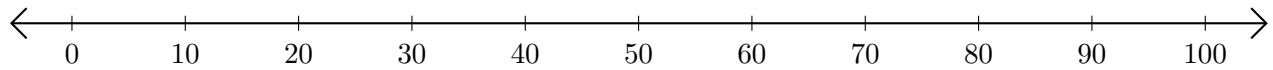
# Adding on Number Lines (C)

Use the number lines to calculate each sum.

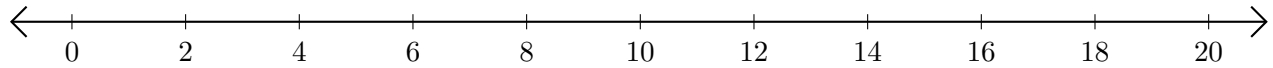
1.  $42 + 21 = \underline{\quad}$



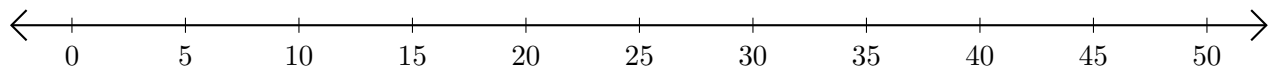
2.  $70 + 10 = \underline{\quad}$



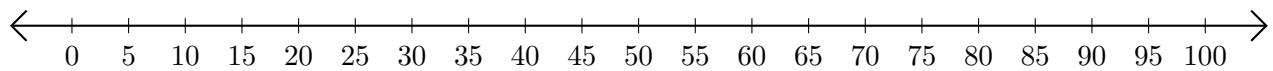
3.  $2 + 2 = \underline{\quad}$



4.  $40 + 5 = \underline{\quad}$



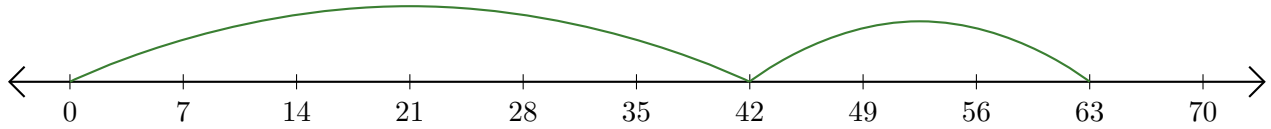
5.  $40 + 50 = \underline{\quad}$



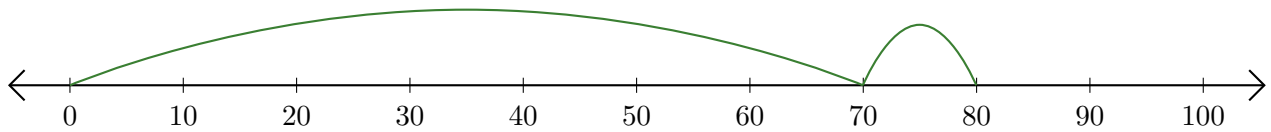
# Adding on Number Lines (C) Answers

Use the number lines to calculate each sum.

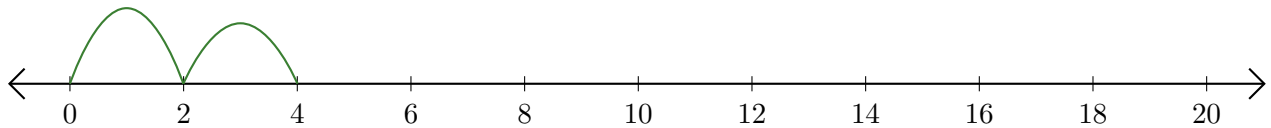
1.  $42 + 21 = \underline{63}$



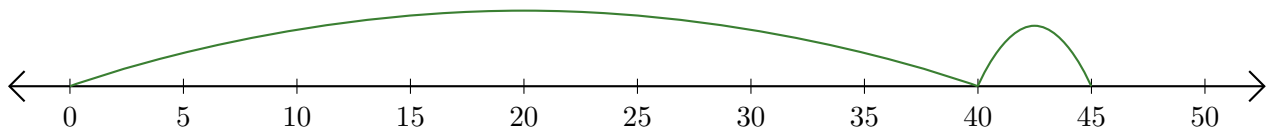
2.  $70 + 10 = \underline{80}$



3.  $2 + 2 = \underline{4}$



4.  $40 + 5 = \underline{45}$



5.  $40 + 50 = \underline{90}$

