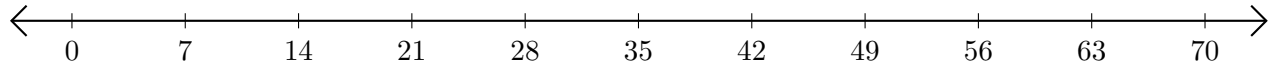


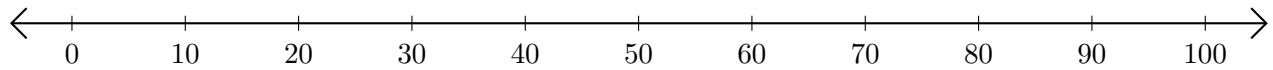
Adding on Number Lines (C)

Use the number lines to calculate each sum.

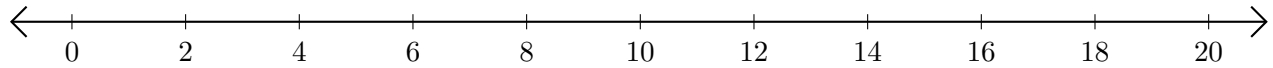
1. $42 + 21 = \underline{\quad}$



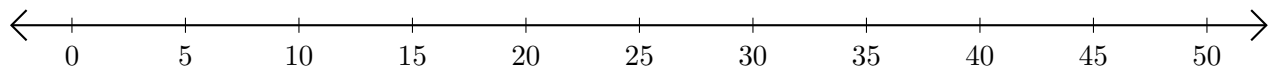
2. $70 + 10 = \underline{\quad}$



3. $2 + 2 = \underline{\quad}$



4. $40 + 5 = \underline{\quad}$



5. $40 + 50 = \underline{\quad}$

