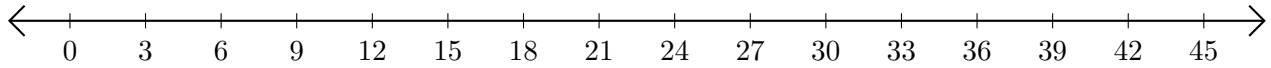


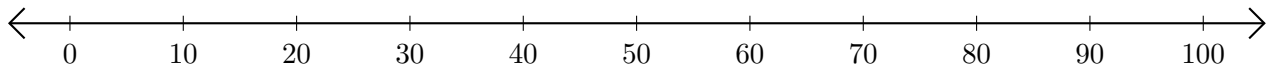
Adding on Number Lines (D)

Use the number lines to calculate each sum.

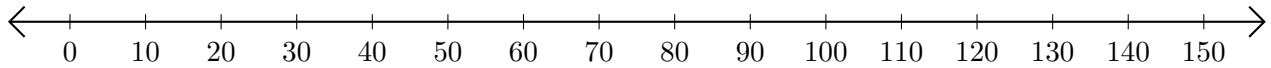
1. $27 + 3 = \underline{\quad}$



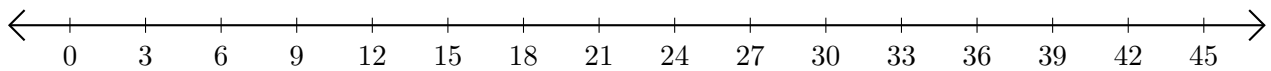
2. $70 + 30 = \underline{\quad}$



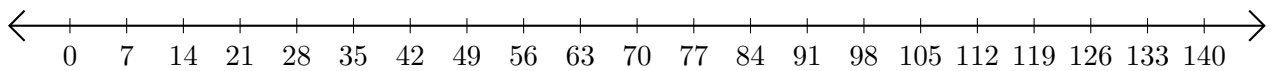
3. $110 + 30 = \underline{\quad}$



4. $21 + 15 = \underline{\quad}$



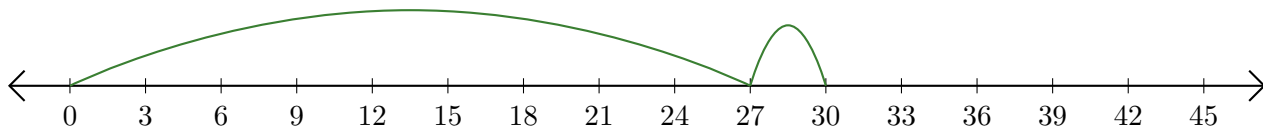
5. $77 + 42 = \underline{\quad}$



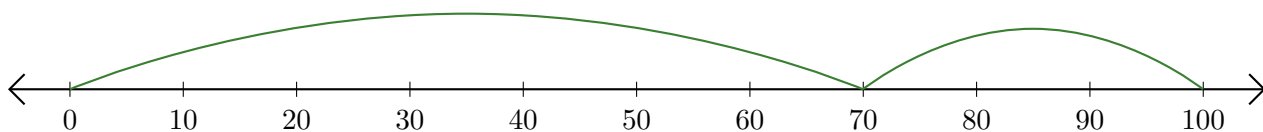
Adding on Number Lines (D) Answers

Use the number lines to calculate each sum.

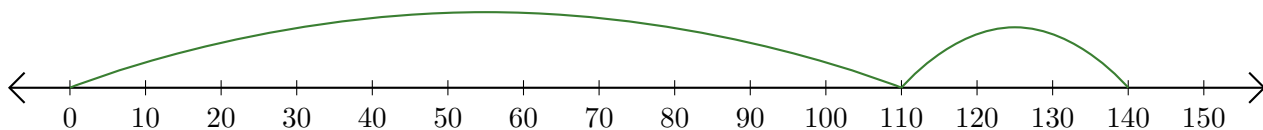
1. $27 + 3 = \underline{30}$



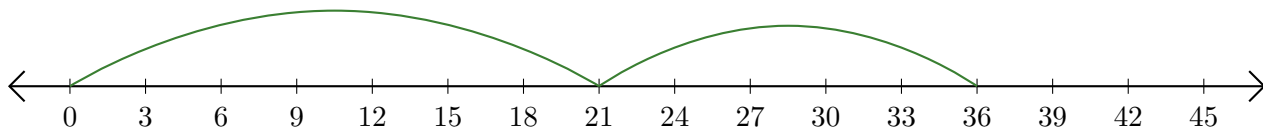
2. $70 + 30 = \underline{100}$



3. $110 + 30 = \underline{140}$



4. $21 + 15 = \underline{36}$



5. $77 + 42 = \underline{119}$

