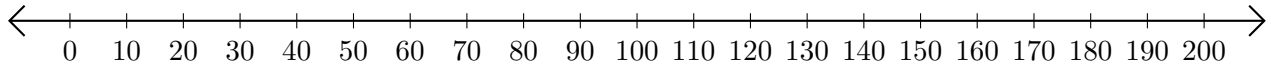


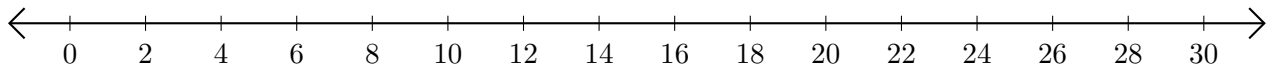
Adding on Number Lines (E)

Use the number lines to calculate each sum.

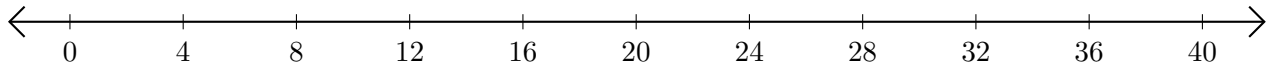
1. $160 + 40 = \underline{\hspace{2cm}}$



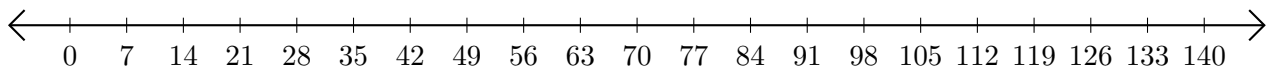
2. $16 + 14 = \underline{\hspace{2cm}}$



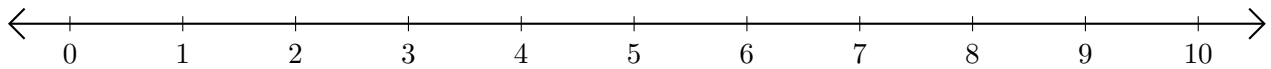
3. $28 + 12 = \underline{\hspace{2cm}}$



4. $119 + 21 = \underline{\hspace{2cm}}$



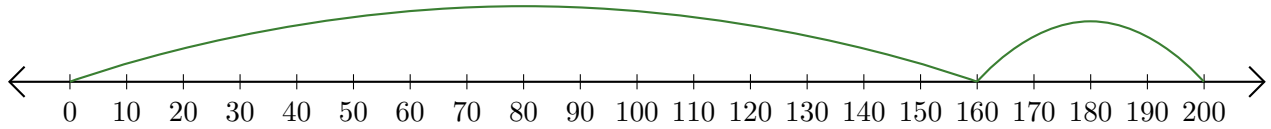
5. $4 + 4 = \underline{\hspace{2cm}}$



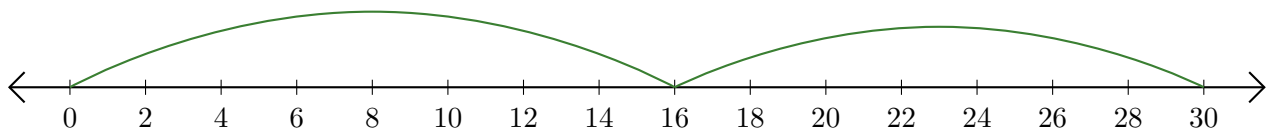
Adding on Number Lines (E) Answers

Use the number lines to calculate each sum.

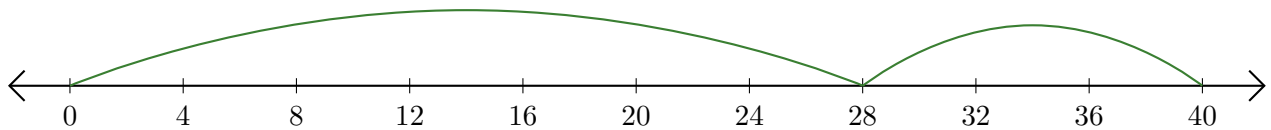
1. $160 + 40 = \underline{200}$



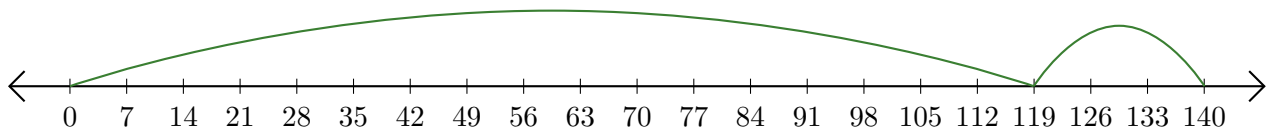
2. $16 + 14 = \underline{30}$



3. $28 + 12 = \underline{40}$



4. $119 + 21 = \underline{140}$



5. $4 + 4 = \underline{8}$

