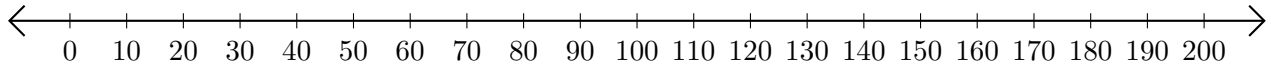


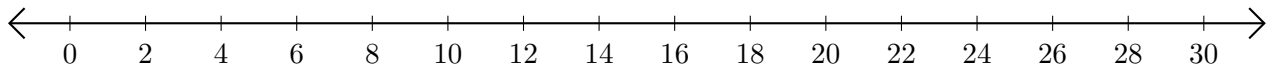
Adding on Number Lines (E)

Use the number lines to calculate each sum.

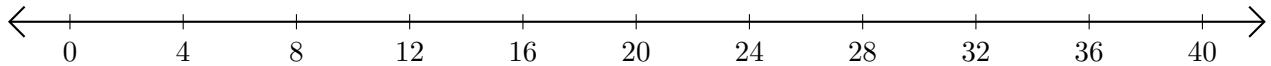
1. $160 + 40 = \underline{\quad}$



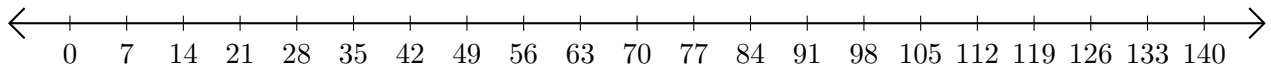
2. $16 + 14 = \underline{\quad}$



3. $28 + 12 = \underline{\quad}$



4. $119 + 21 = \underline{\quad}$



5. $4 + 4 = \underline{\quad}$

