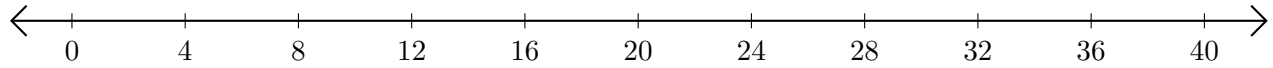


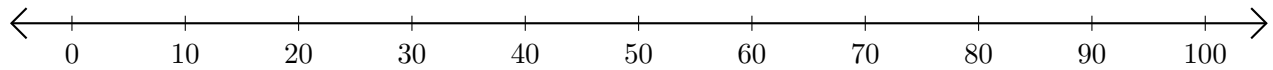
# Adding on Number Lines (G)

Use the number lines to calculate each sum.

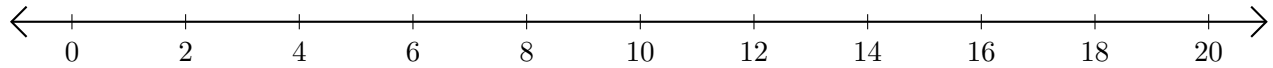
1.  $8 + 12 = \underline{\quad}$



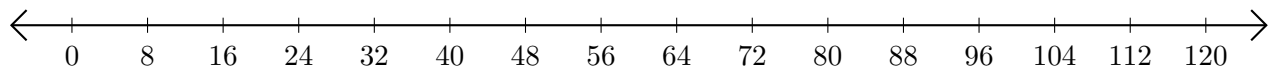
2.  $10 + 90 = \underline{\quad}$



3.  $16 + 2 = \underline{\quad}$



4.  $104 + 8 = \underline{\quad}$



5.  $15 + 5 = \underline{\quad}$

