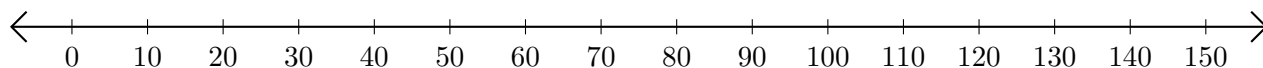


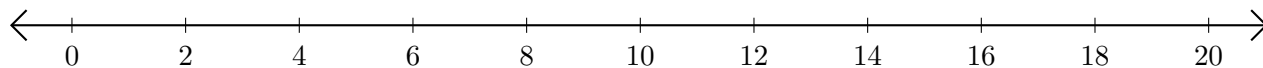
Adding on Number Lines (I)

Use the number lines to calculate each sum.

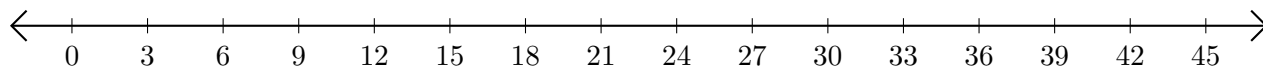
1. $100 + 30 = \underline{\hspace{2cm}}$



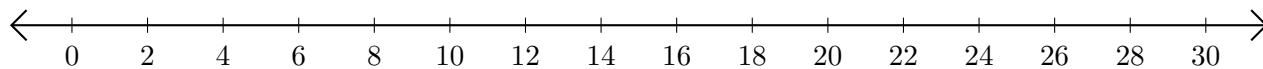
2. $10 + 4 = \underline{\hspace{2cm}}$



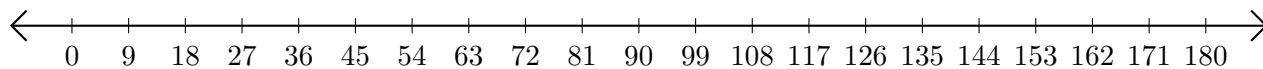
3. $15 + 12 = \underline{\hspace{2cm}}$



4. $28 + 2 = \underline{\hspace{2cm}}$



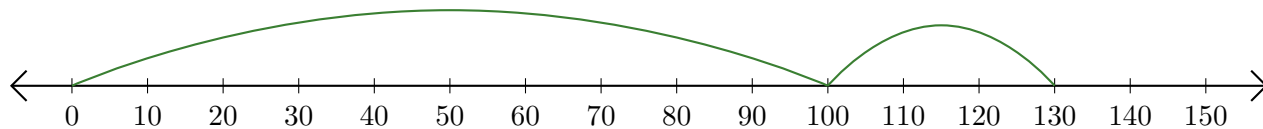
5. $153 + 18 = \underline{\hspace{2cm}}$



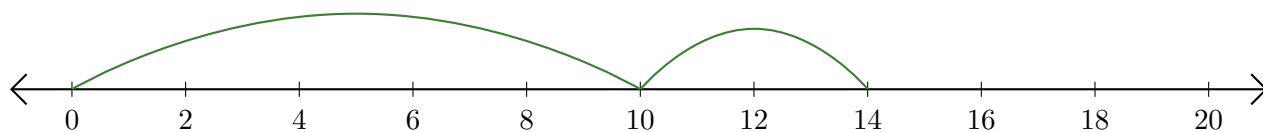
Adding on Number Lines (I) Answers

Use the number lines to calculate each sum.

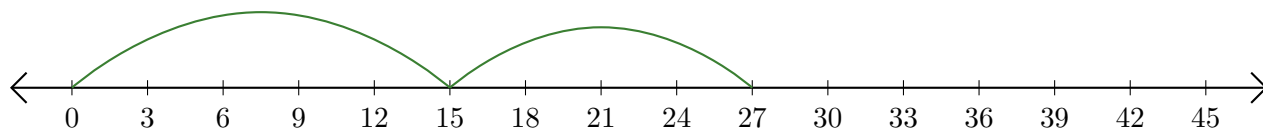
1. $100 + 30 = \underline{130}$



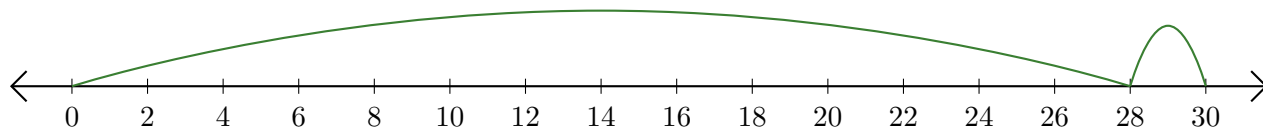
2. $10 + 4 = \underline{14}$



3. $15 + 12 = \underline{27}$



4. $28 + 2 = \underline{30}$



5. $153 + 18 = \underline{171}$

