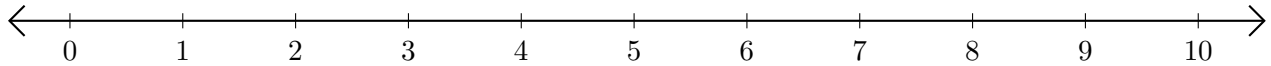


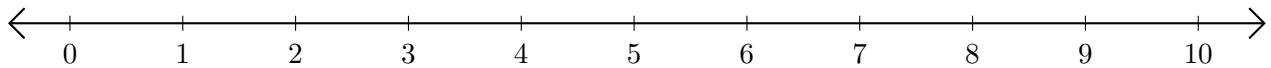
# Adding and Subtracting on Number Lines (A)

Use the number lines to calculate each sum or difference.

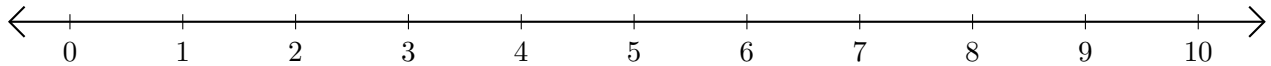
1.  $9 + 1 = \underline{\quad}$



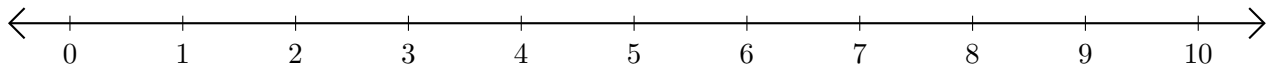
2.  $8 - 6 = \underline{\quad}$



3.  $4 + 5 = \underline{\quad}$



4.  $10 - 3 = \underline{\quad}$



5.  $8 - 5 = \underline{\quad}$

