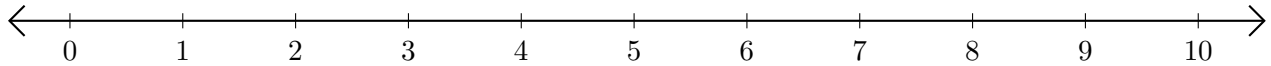


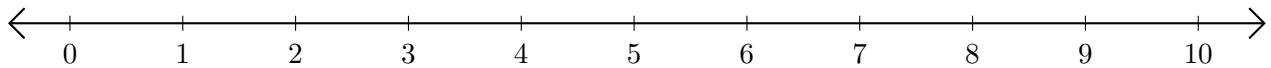
Adding and Subtracting on Number Lines (F)

Use the number lines to calculate each sum or difference.

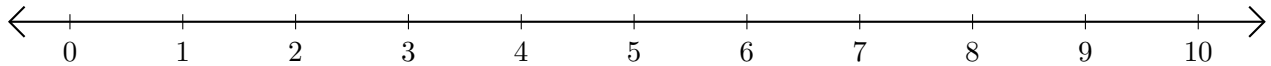
1. $3 + 7 = \underline{\quad}$



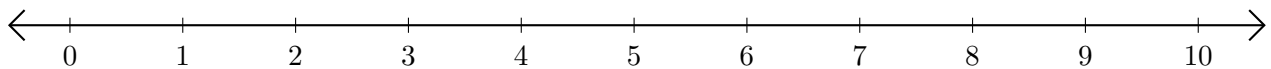
2. $7 - 1 = \underline{\quad}$



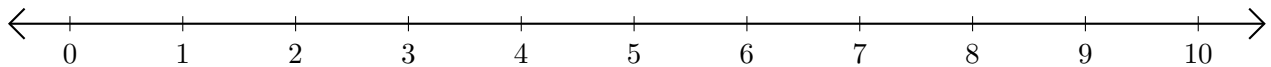
3. $4 + 4 = \underline{\quad}$



4. $10 - 9 = \underline{\quad}$



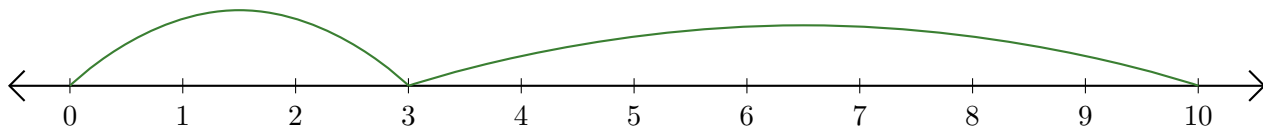
5. $2 + 1 = \underline{\quad}$



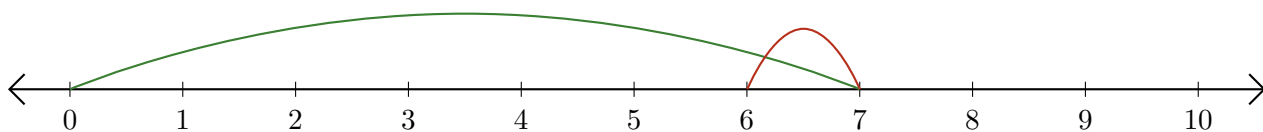
Adding and Subtracting on Number Lines (F) Answers

Use the number lines to calculate each sum or difference.

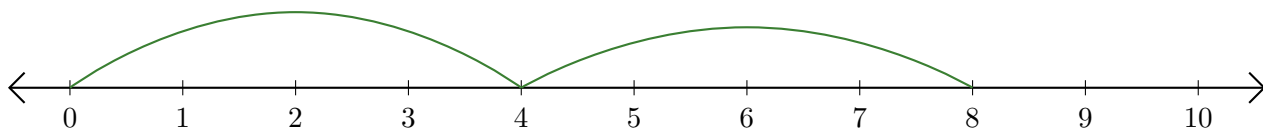
1. $3 + 7 = \underline{10}$



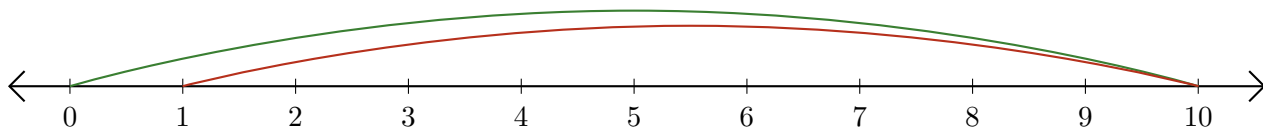
2. $7 - 1 = \underline{6}$



3. $4 + 4 = \underline{8}$



4. $10 - 9 = \underline{1}$



5. $2 + 1 = \underline{3}$

