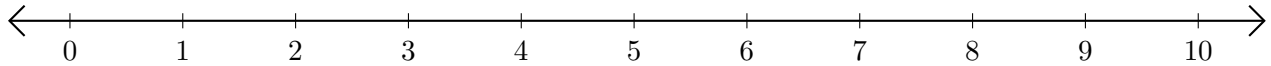


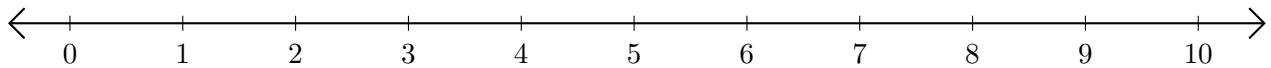
# Adding and Subtracting on Number Lines (F)

Use the number lines to calculate each sum or difference.

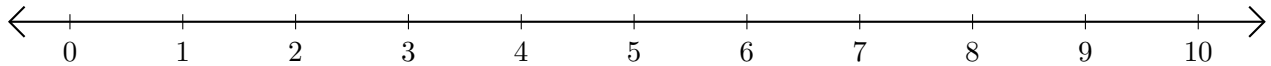
1.  $3 + 7 = \underline{\quad}$



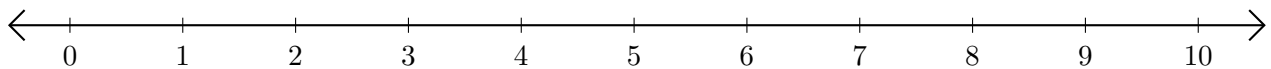
2.  $7 - 1 = \underline{\quad}$



3.  $4 + 4 = \underline{\quad}$



4.  $10 - 9 = \underline{\quad}$



5.  $2 + 1 = \underline{\quad}$

