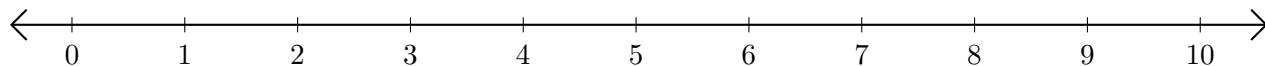


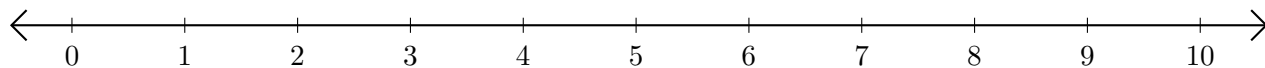
# Adding and Subtracting on Number Lines (G)

Use the number lines to calculate each sum or difference.

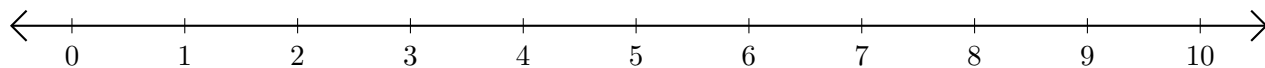
1.  $4 + 3 = \underline{\quad}$



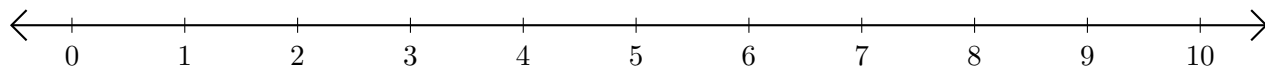
2.  $6 - 1 = \underline{\quad}$



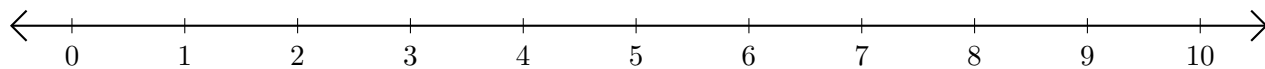
3.  $9 + 1 = \underline{\quad}$



4.  $5 - 3 = \underline{\quad}$



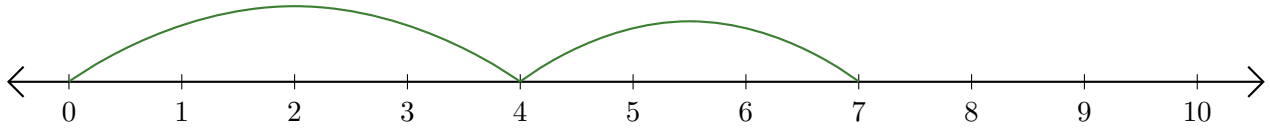
5.  $10 - 6 = \underline{\quad}$



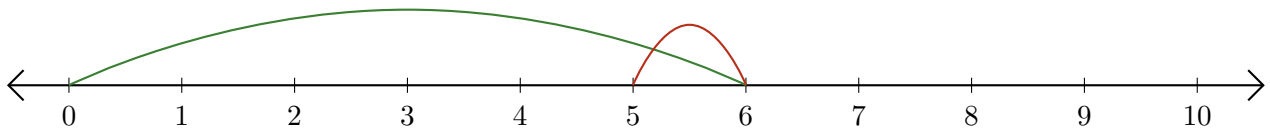
# Adding and Subtracting on Number Lines (G) Answers

Use the number lines to calculate each sum or difference.

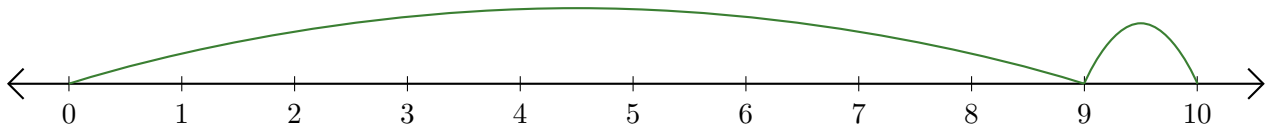
1.  $4 + 3 = \underline{7}$



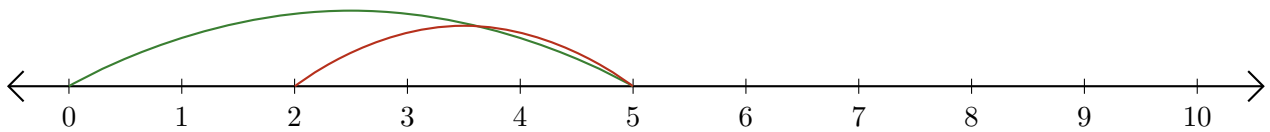
2.  $6 - 1 = \underline{5}$



3.  $9 + 1 = \underline{10}$



4.  $5 - 3 = \underline{2}$



5.  $10 - 6 = \underline{4}$

