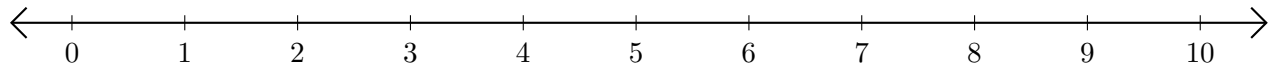


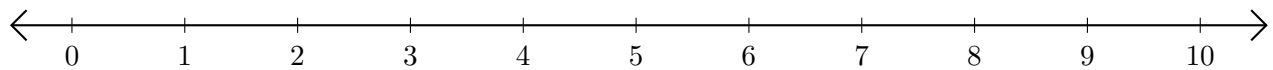
Adding and Subtracting on Number Lines (G)

Use the number lines to calculate each sum or difference.

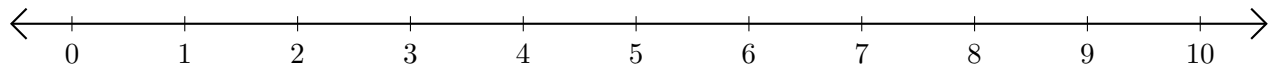
1. $4 + 3 = \underline{\quad}$



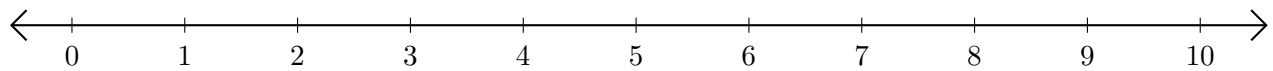
2. $6 - 1 = \underline{\quad}$



3. $9 + 1 = \underline{\quad}$



4. $5 - 3 = \underline{\quad}$



5. $10 - 6 = \underline{\quad}$

