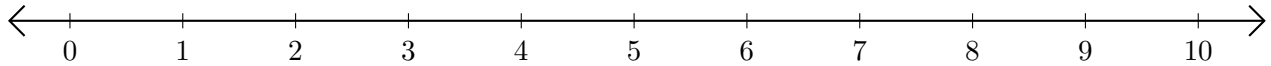


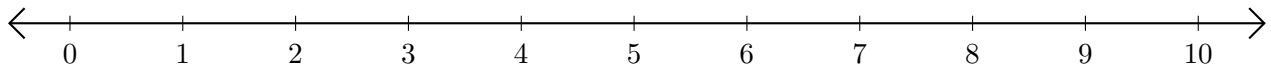
# Adding and Subtracting on Number Lines (H)

Use the number lines to calculate each sum or difference.

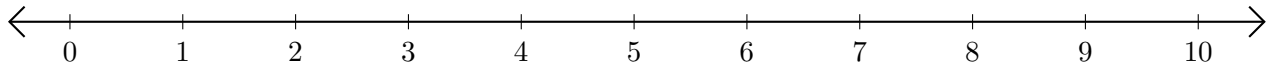
1.  $2 + 1 = \underline{\quad}$



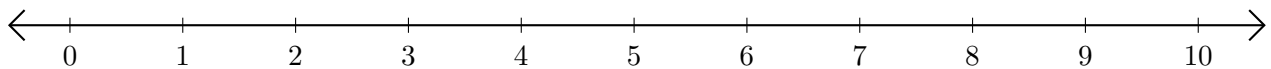
2.  $10 - 9 = \underline{\quad}$



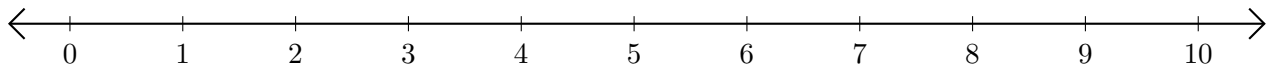
3.  $1 + 5 = \underline{\quad}$



4.  $6 - 4 = \underline{\quad}$



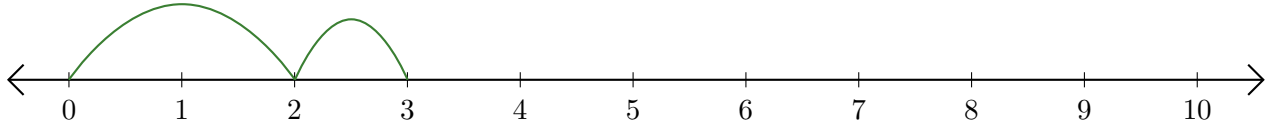
5.  $10 - 8 = \underline{\quad}$



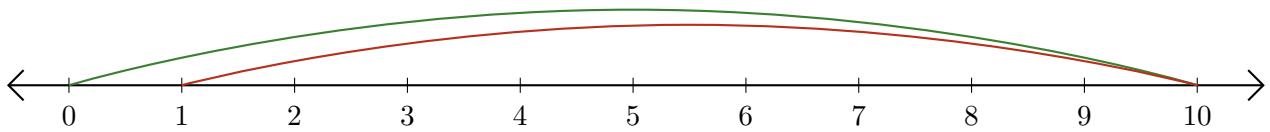
# Adding and Subtracting on Number Lines (H) Answers

Use the number lines to calculate each sum or difference.

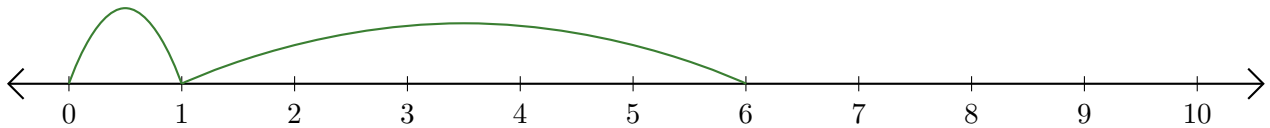
1.  $2 + 1 = \underline{3}$



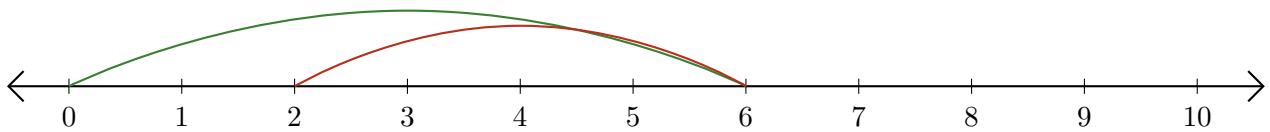
2.  $10 - 9 = \underline{1}$



3.  $1 + 5 = \underline{6}$



4.  $6 - 4 = \underline{2}$



5.  $10 - 8 = \underline{2}$

