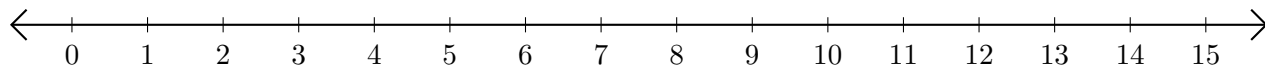


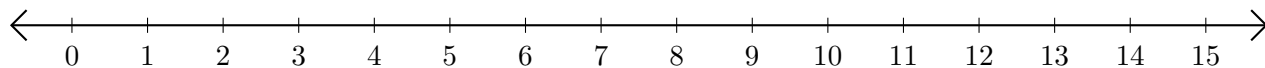
Adding and Subtracting on Number Lines (A)

Use the number lines to calculate each sum or difference.

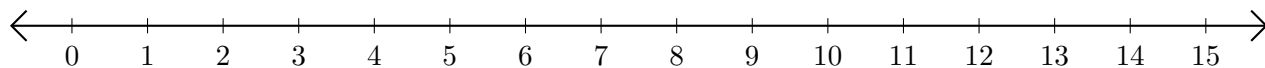
1. $8 + 3 = \underline{\quad}$



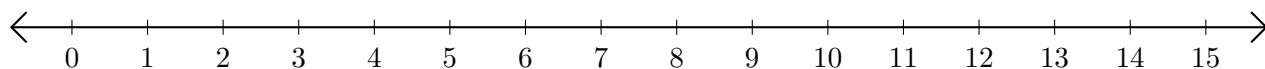
2. $10 - 5 = \underline{\quad}$



3. $12 + 1 = \underline{\quad}$



4. $14 - 11 = \underline{\quad}$



5. $10 + 2 = \underline{\quad}$

