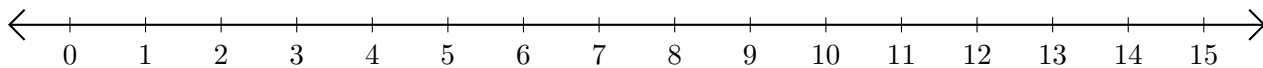


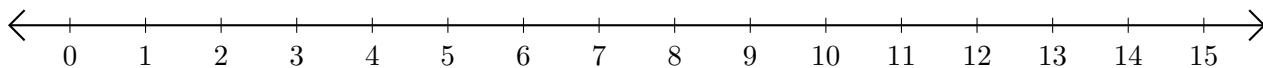
# Adding and Subtracting on Number Lines (C)

Use the number lines to calculate each sum or difference.

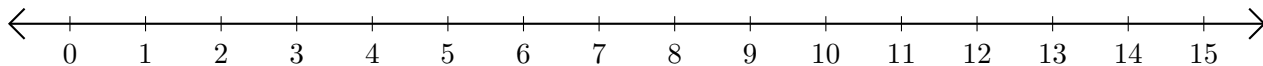
1.  $9 + 1 = \underline{\quad}$



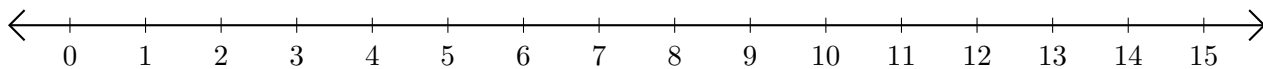
2.  $12 - 11 = \underline{\quad}$



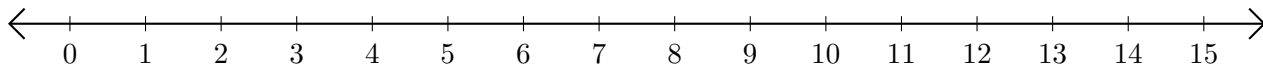
3.  $5 + 2 = \underline{\quad}$



4.  $14 - 13 = \underline{\quad}$



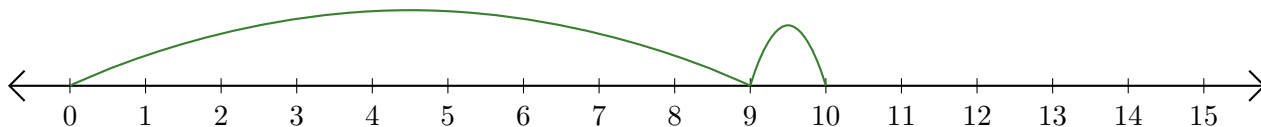
5.  $7 - 4 = \underline{\quad}$



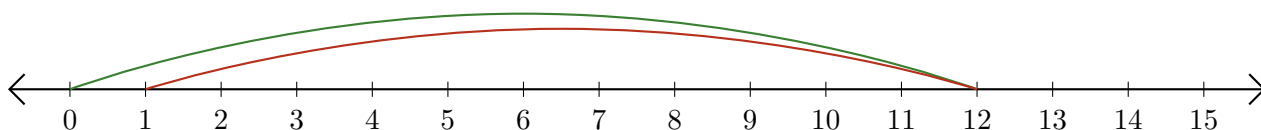
# Adding and Subtracting on Number Lines (C) Answers

Use the number lines to calculate each sum or difference.

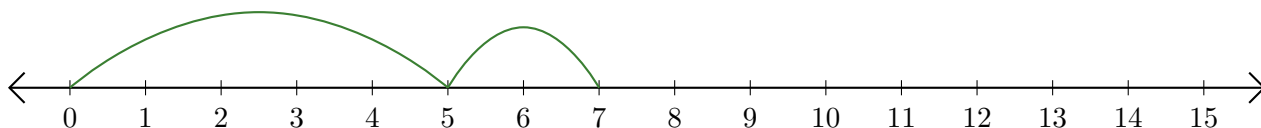
1.  $9 + 1 = \underline{10}$



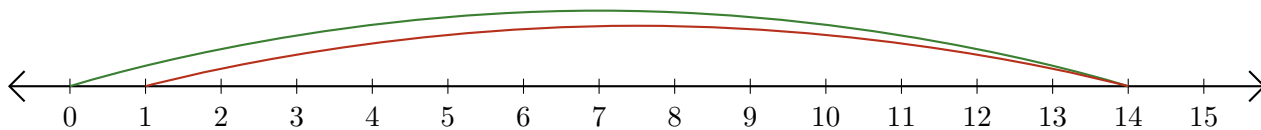
2.  $12 - 11 = \underline{1}$



3.  $5 + 2 = \underline{7}$



4.  $14 - 13 = \underline{1}$



5.  $7 - 4 = \underline{3}$

