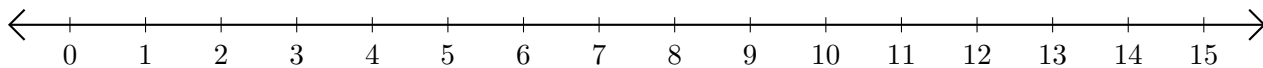


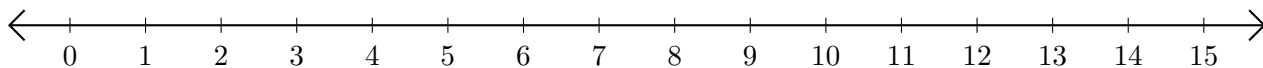
Adding and Subtracting on Number Lines (C)

Use the number lines to calculate each sum or difference.

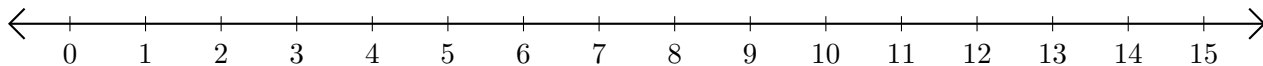
1. $9 + 1 = \underline{\quad}$



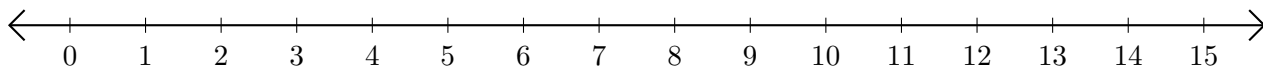
2. $12 - 11 = \underline{\quad}$



3. $5 + 2 = \underline{\quad}$



4. $14 - 13 = \underline{\quad}$



5. $7 - 4 = \underline{\quad}$

