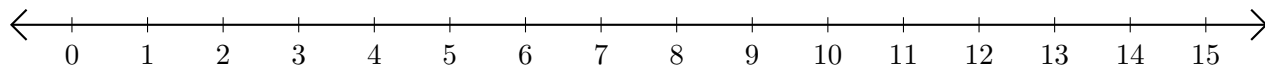


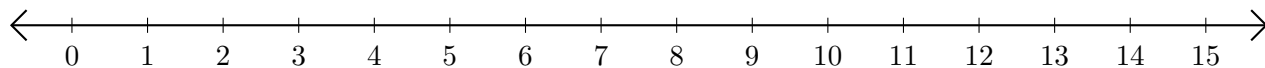
# Adding and Subtracting on Number Lines (D)

Use the number lines to calculate each sum or difference.

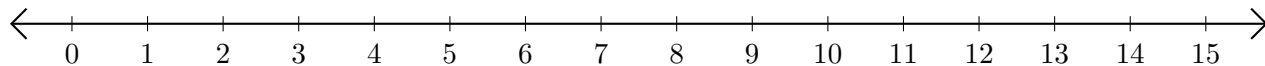
1.  $10 + 5 = \underline{\quad}$



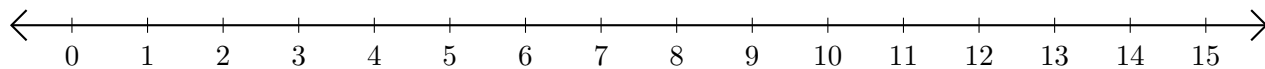
2.  $8 - 4 = \underline{\quad}$



3.  $13 + 1 = \underline{\quad}$



4.  $13 - 6 = \underline{\quad}$



5.  $3 + 4 = \underline{\quad}$

