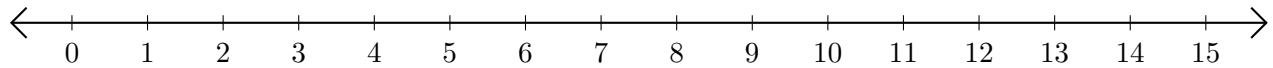


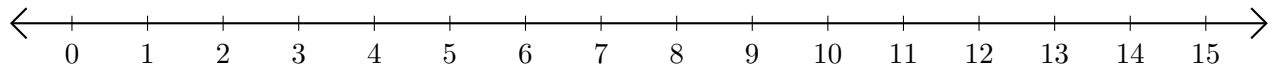
Adding and Subtracting on Number Lines (E)

Use the number lines to calculate each sum or difference.

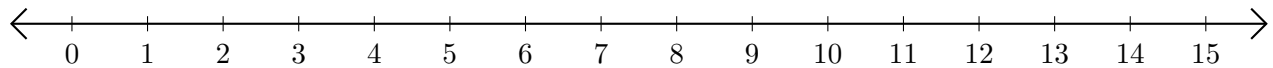
1. $7 + 2 = \underline{\quad}$



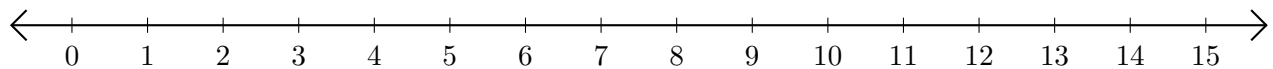
2. $10 - 2 = \underline{\quad}$



3. $11 + 4 = \underline{\quad}$



4. $8 - 1 = \underline{\quad}$



5. $10 - 8 = \underline{\quad}$

