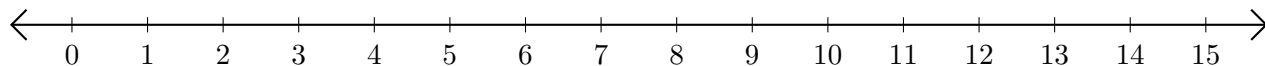


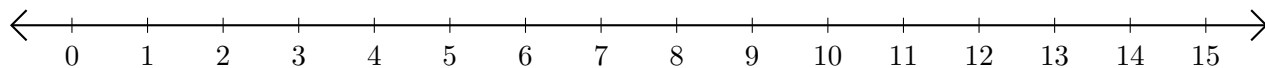
# Adding and Subtracting on Number Lines (G)

Use the number lines to calculate each sum or difference.

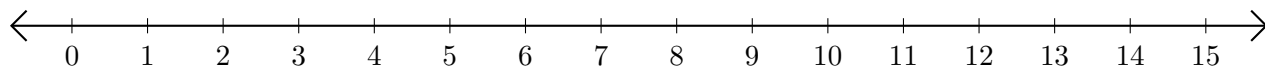
1.  $6 + 9 = \underline{\quad}$



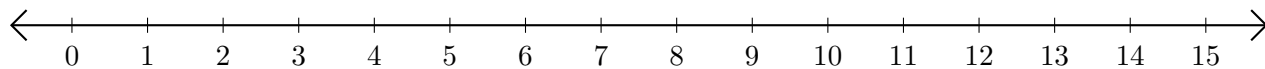
2.  $13 - 1 = \underline{\quad}$



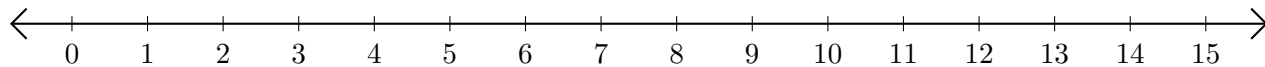
3.  $9 + 5 = \underline{\quad}$



4.  $15 - 14 = \underline{\quad}$



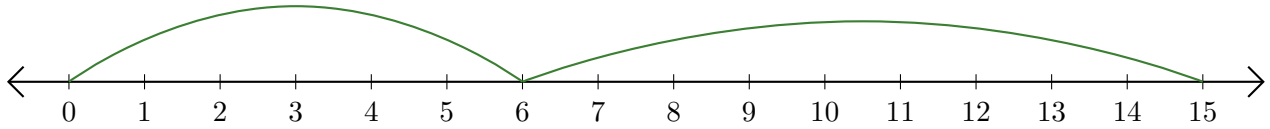
5.  $15 - 7 = \underline{\quad}$



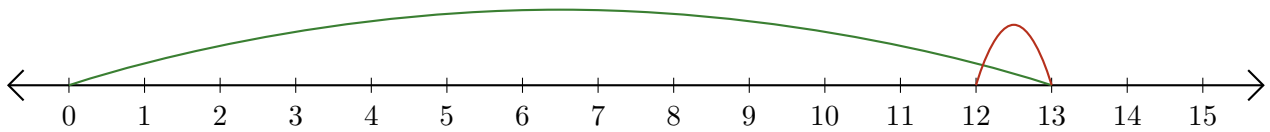
# Adding and Subtracting on Number Lines (G) Answers

Use the number lines to calculate each sum or difference.

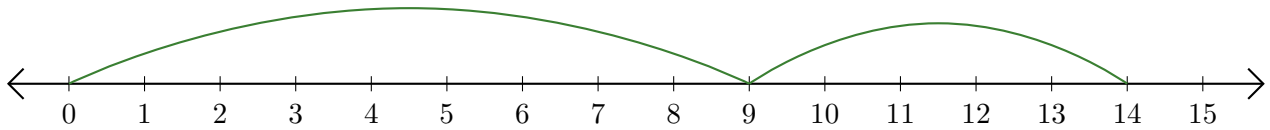
1.  $6 + 9 = \underline{15}$



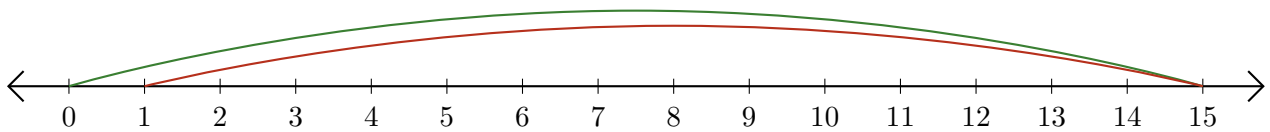
2.  $13 - 1 = \underline{12}$



3.  $9 + 5 = \underline{14}$



4.  $15 - 14 = \underline{1}$



5.  $15 - 7 = \underline{8}$

