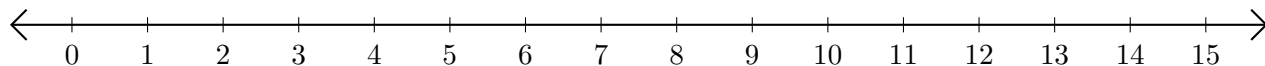


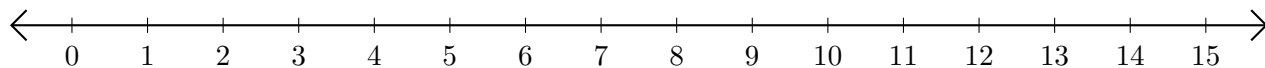
Adding and Subtracting on Number Lines (G)

Use the number lines to calculate each sum or difference.

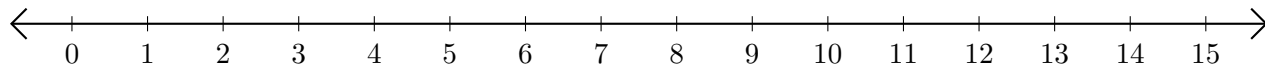
1. $6 + 9 = \underline{\quad}$



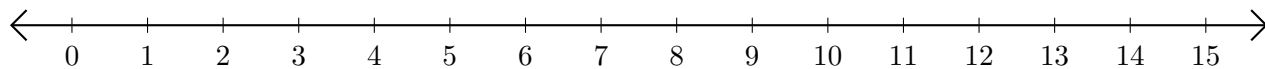
2. $13 - 1 = \underline{\quad}$



3. $9 + 5 = \underline{\quad}$



4. $15 - 14 = \underline{\quad}$



5. $15 - 7 = \underline{\quad}$

