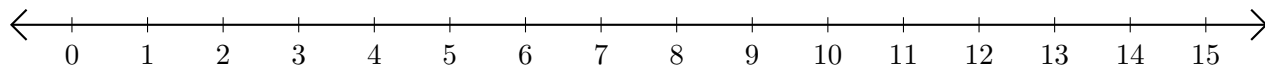


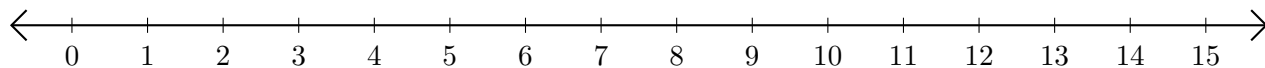
Adding and Subtracting on Number Lines (H)

Use the number lines to calculate each sum or difference.

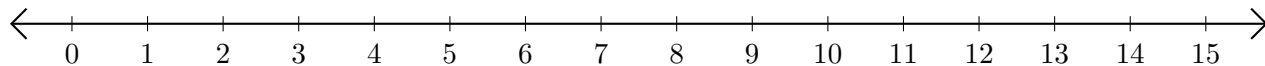
1. $6 + 5 = \underline{\quad}$



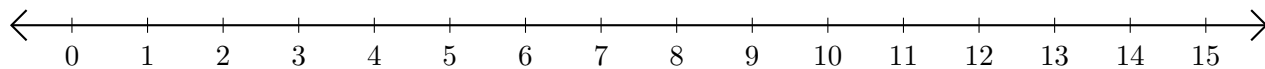
2. $10 - 9 = \underline{\quad}$



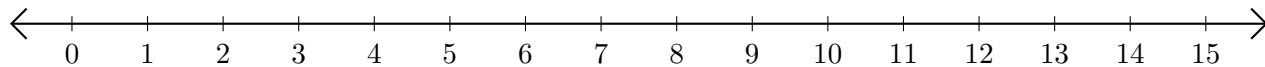
3. $13 + 1 = \underline{\quad}$



4. $15 - 12 = \underline{\quad}$



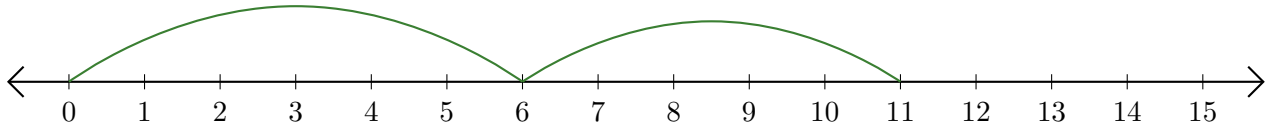
5. $2 + 1 = \underline{\quad}$



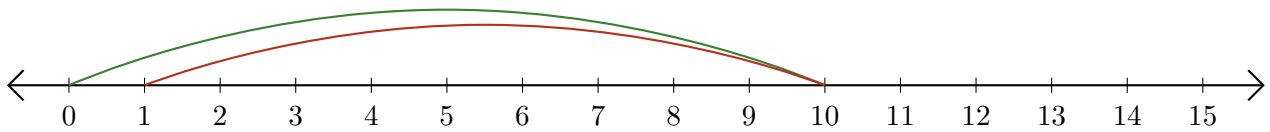
Adding and Subtracting on Number Lines (H) Answers

Use the number lines to calculate each sum or difference.

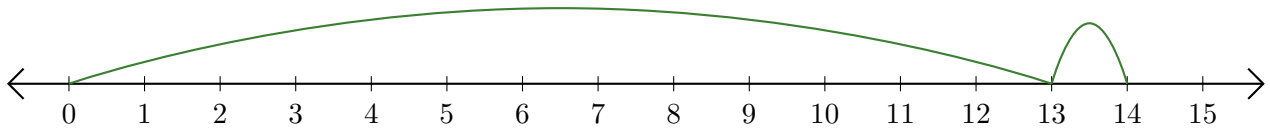
1. $6 + 5 = \underline{11}$



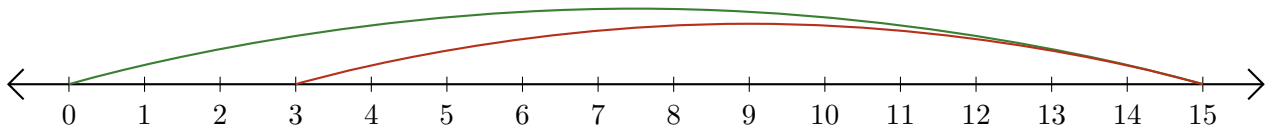
2. $10 - 9 = \underline{1}$



3. $13 + 1 = \underline{14}$



4. $15 - 12 = \underline{3}$



5. $2 + 1 = \underline{3}$

