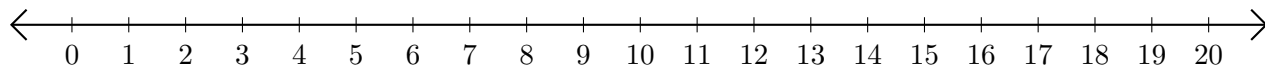


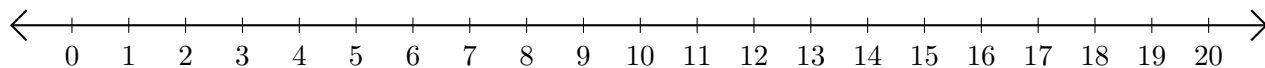
# Adding and Subtracting on Number Lines (A)

Use the number lines to calculate each sum or difference.

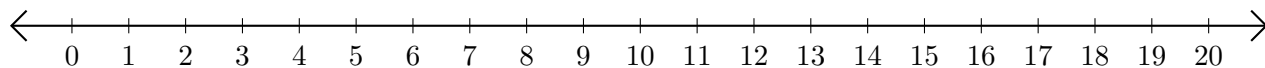
1.  $7 + 7 = \underline{\quad}$



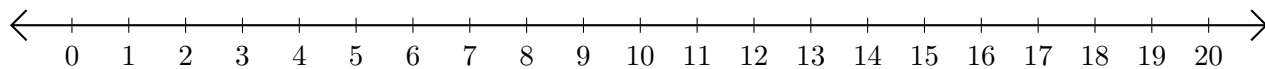
2.  $16 - 11 = \underline{\quad}$



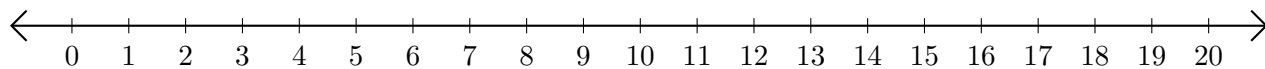
3.  $5 + 7 = \underline{\quad}$



4.  $16 - 13 = \underline{\quad}$



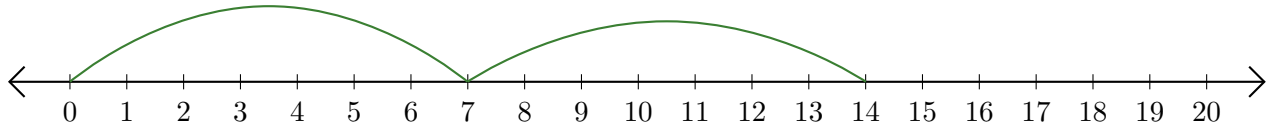
5.  $9 + 8 = \underline{\quad}$



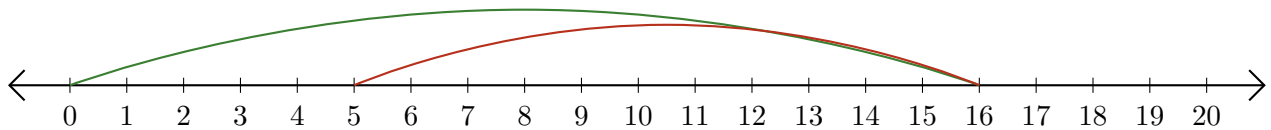
# Adding and Subtracting on Number Lines (A) Answers

Use the number lines to calculate each sum or difference.

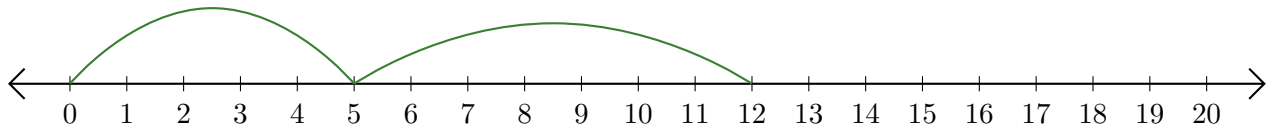
1.  $7 + 7 = \underline{14}$



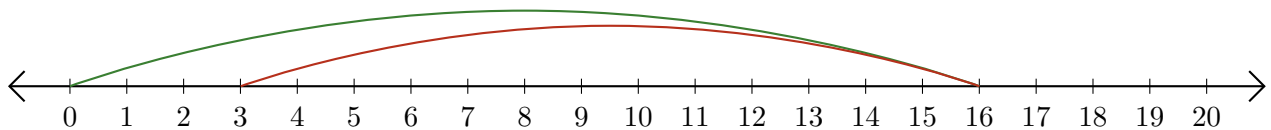
2.  $16 - 11 = \underline{5}$



3.  $5 + 7 = \underline{12}$



4.  $16 - 13 = \underline{3}$



5.  $9 + 8 = \underline{17}$

