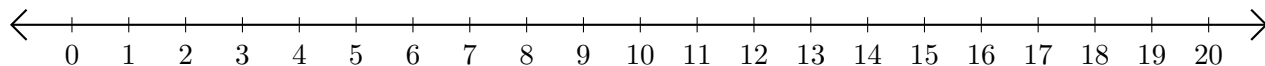


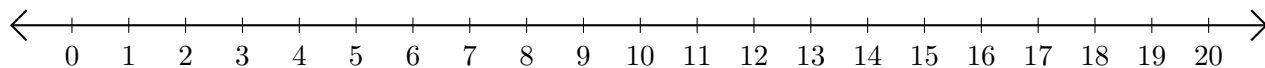
# Adding and Subtracting on Number Lines (B)

Use the number lines to calculate each sum or difference.

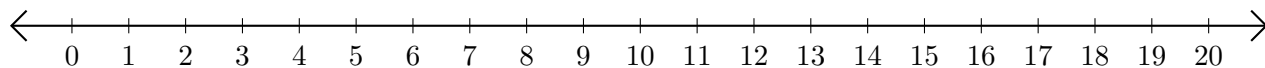
1.  $11 + 3 = \underline{\quad}$



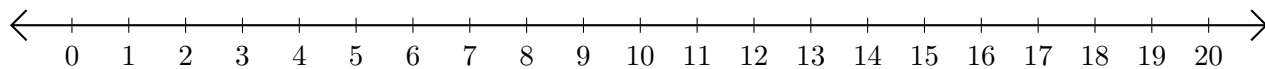
2.  $17 - 13 = \underline{\quad}$



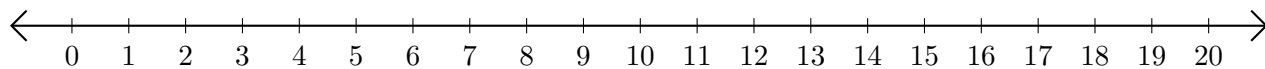
3.  $16 + 1 = \underline{\quad}$



4.  $7 - 3 = \underline{\quad}$



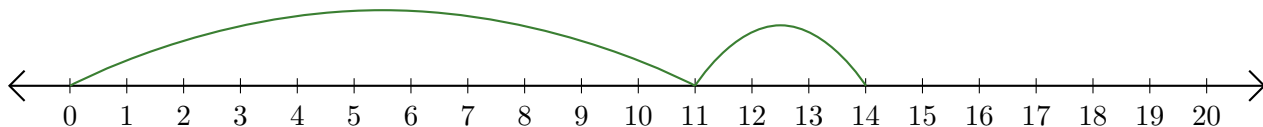
5.  $17 - 4 = \underline{\quad}$



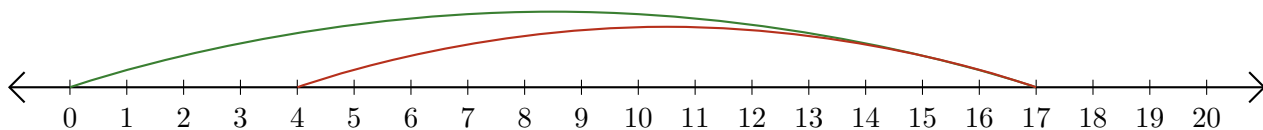
# Adding and Subtracting on Number Lines (B) Answers

Use the number lines to calculate each sum or difference.

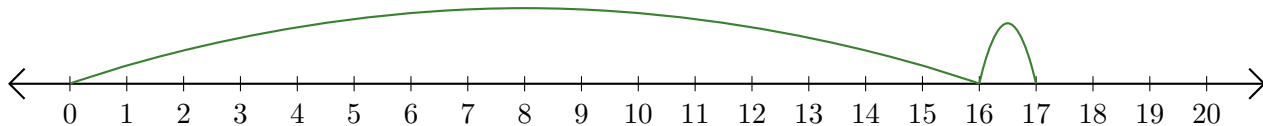
1.  $11 + 3 = \underline{14}$



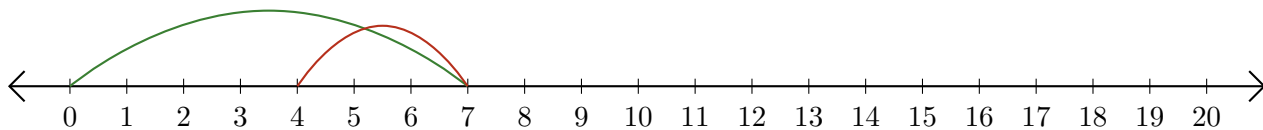
2.  $17 - 13 = \underline{4}$



3.  $16 + 1 = \underline{17}$



4.  $7 - 3 = \underline{4}$



5.  $17 - 4 = \underline{13}$

