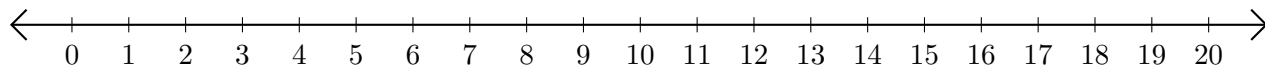


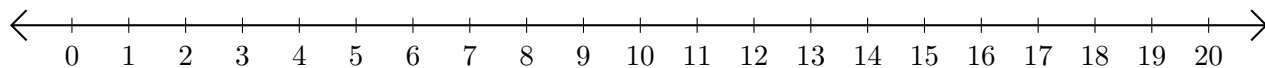
Adding and Subtracting on Number Lines (B)

Use the number lines to calculate each sum or difference.

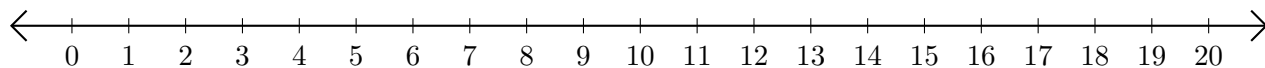
1. $11 + 3 = \underline{\quad}$



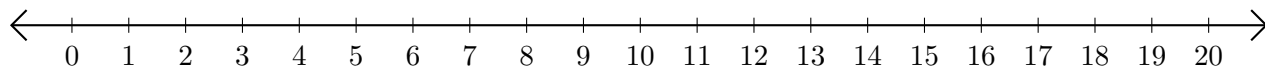
2. $17 - 13 = \underline{\quad}$



3. $16 + 1 = \underline{\quad}$



4. $7 - 3 = \underline{\quad}$



5. $17 - 4 = \underline{\quad}$

