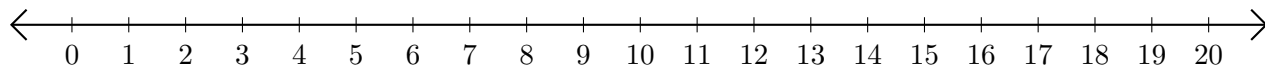


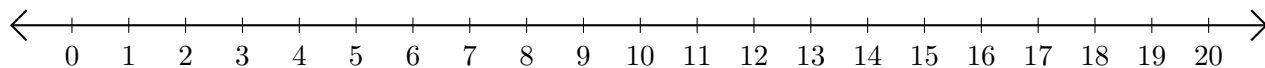
# Adding and Subtracting on Number Lines (C)

Use the number lines to calculate each sum or difference.

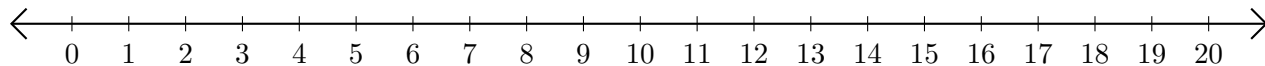
1.  $9 + 10 = \underline{\quad}$



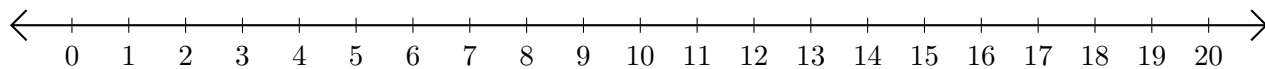
2.  $18 - 11 = \underline{\quad}$



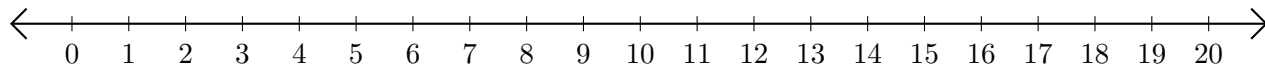
3.  $19 + 1 = \underline{\quad}$



4.  $20 - 16 = \underline{\quad}$



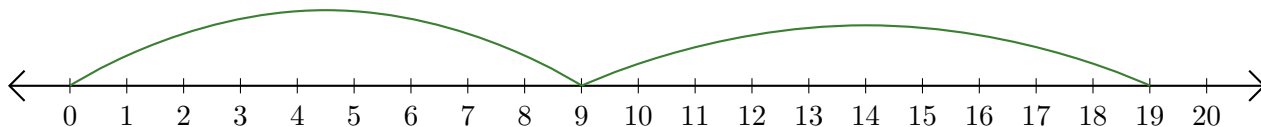
5.  $18 + 2 = \underline{\quad}$



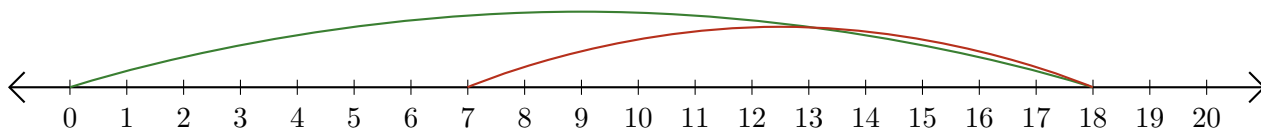
# Adding and Subtracting on Number Lines (C) Answers

Use the number lines to calculate each sum or difference.

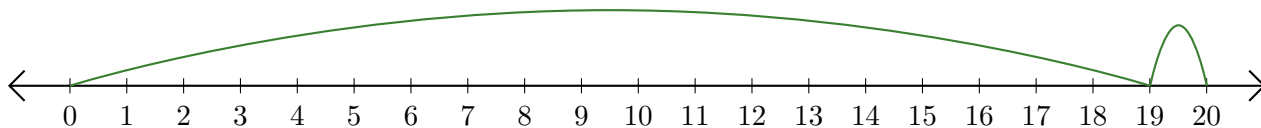
1.  $9 + 10 = \underline{19}$



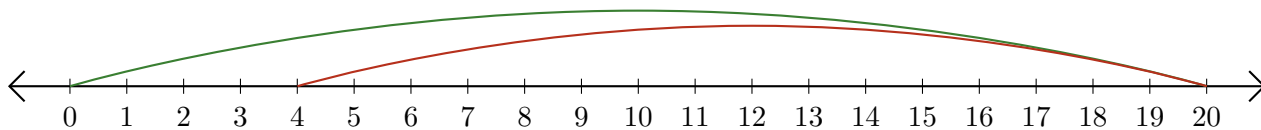
2.  $18 - 11 = \underline{7}$



3.  $19 + 1 = \underline{20}$



4.  $20 - 16 = \underline{4}$



5.  $18 + 2 = \underline{20}$

