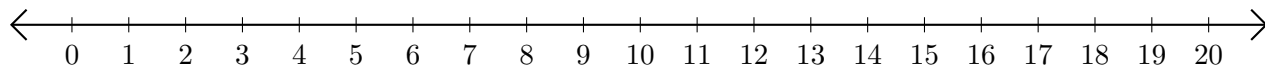


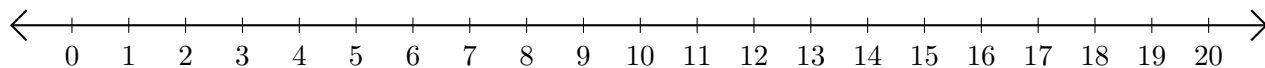
# Adding and Subtracting on Number Lines (D)

Use the number lines to calculate each sum or difference.

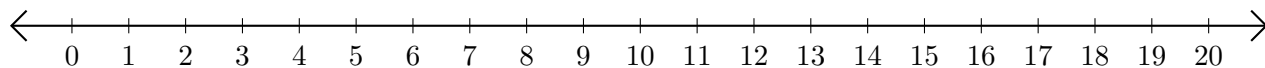
1.  $4 + 14 = \underline{\quad}$



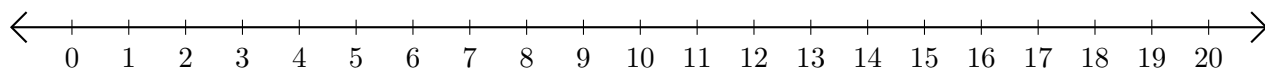
2.  $18 - 15 = \underline{\quad}$



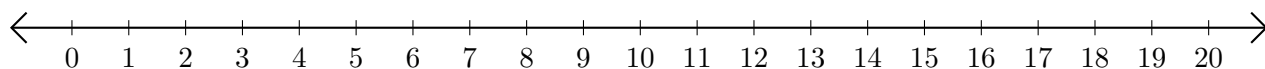
3.  $1 + 2 = \underline{\quad}$



4.  $13 - 10 = \underline{\quad}$



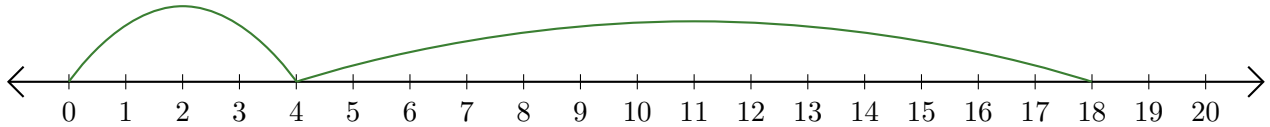
5.  $13 - 8 = \underline{\quad}$



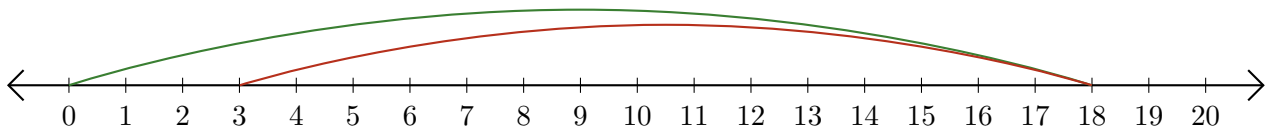
# Adding and Subtracting on Number Lines (D) Answers

Use the number lines to calculate each sum or difference.

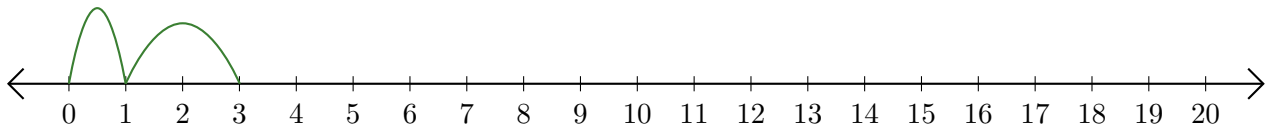
1.  $4 + 14 = \underline{18}$



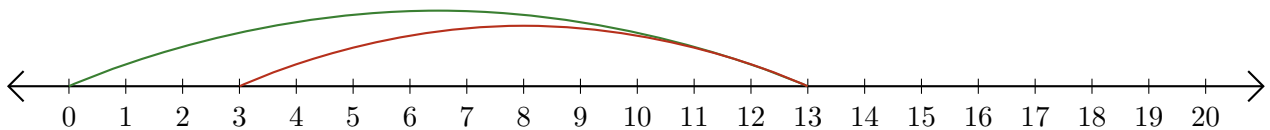
2.  $18 - 15 = \underline{3}$



3.  $1 + 2 = \underline{3}$



4.  $13 - 10 = \underline{3}$



5.  $13 - 8 = \underline{5}$

