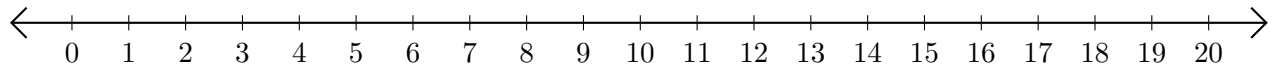


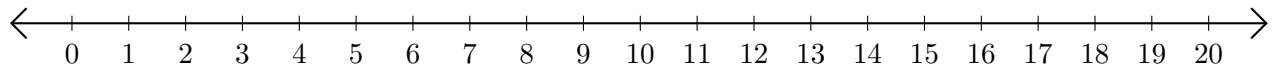
# Adding and Subtracting on Number Lines (E)

Use the number lines to calculate each sum or difference.

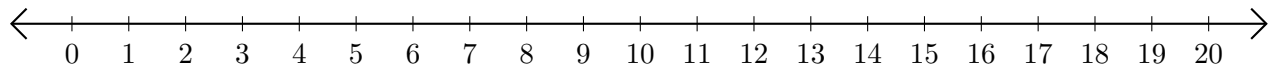
1.  $4 + 9 = \underline{\quad}$



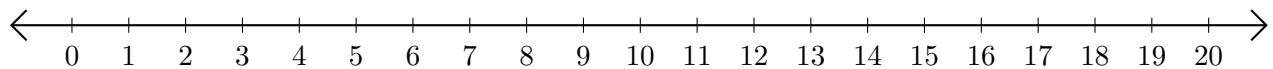
2.  $18 - 15 = \underline{\quad}$



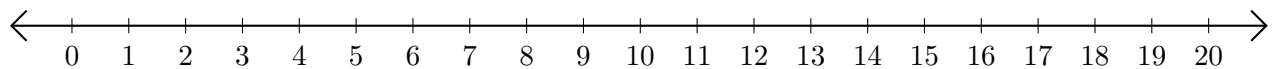
3.  $18 + 2 = \underline{\quad}$



4.  $18 - 7 = \underline{\quad}$



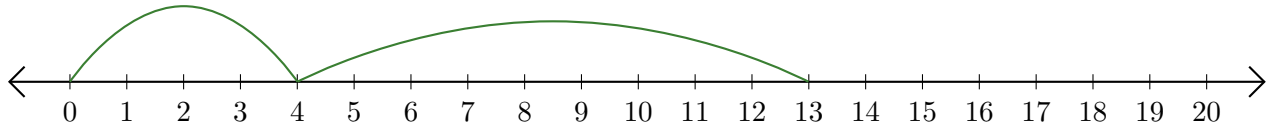
5.  $5 + 2 = \underline{\quad}$



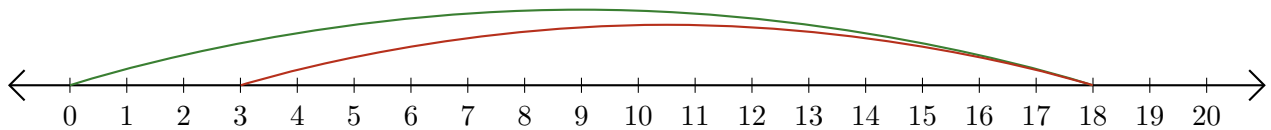
# Adding and Subtracting on Number Lines (E) Answers

Use the number lines to calculate each sum or difference.

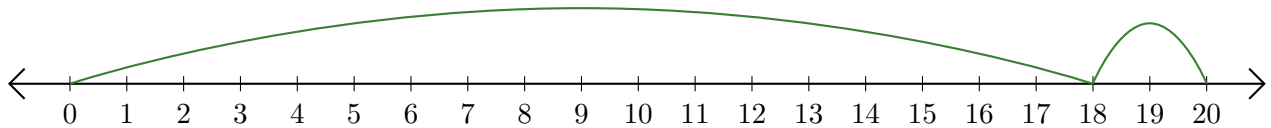
1.  $4 + 9 = \underline{13}$



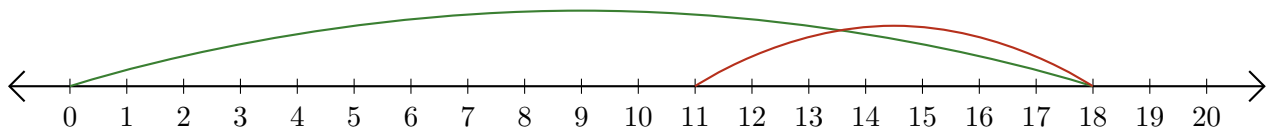
2.  $18 - 15 = \underline{3}$



3.  $18 + 2 = \underline{20}$



4.  $18 - 7 = \underline{11}$



5.  $5 + 2 = \underline{7}$

