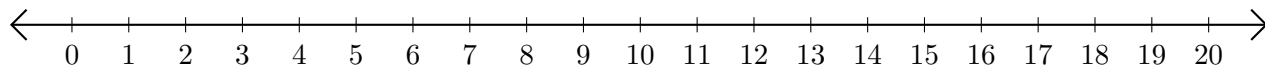


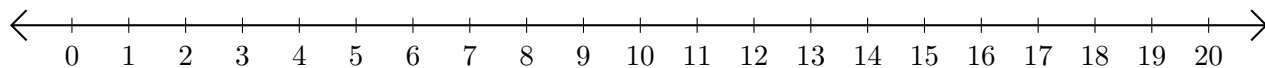
Adding and Subtracting on Number Lines (E)

Use the number lines to calculate each sum or difference.

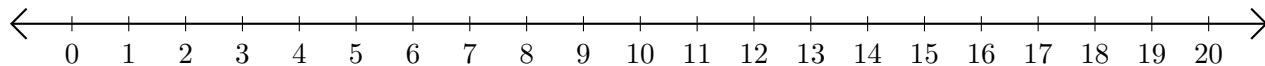
1. $4 + 9 = \underline{\quad}$



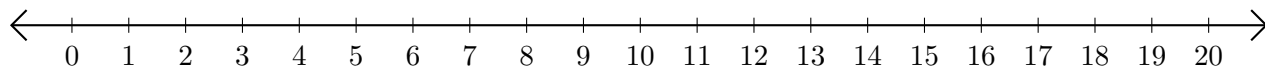
2. $18 - 15 = \underline{\quad}$



3. $18 + 2 = \underline{\quad}$



4. $18 - 7 = \underline{\quad}$



5. $5 + 2 = \underline{\quad}$

