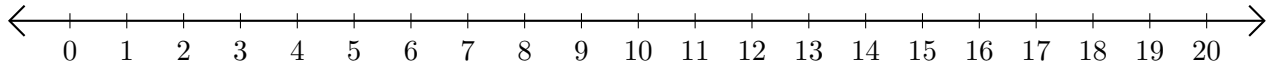


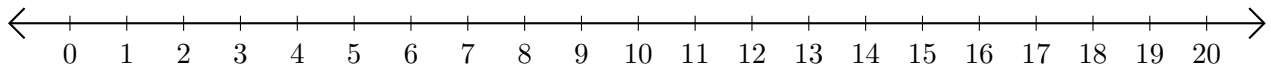
Adding and Subtracting on Number Lines (F)

Use the number lines to calculate each sum or difference.

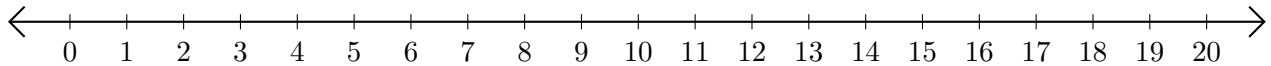
1. $3 + 7 = \underline{\quad}$



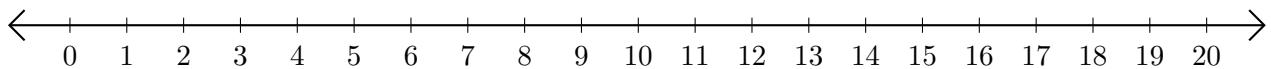
2. $20 - 4 = \underline{\quad}$



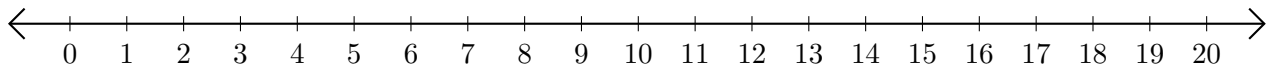
3. $9 + 11 = \underline{\quad}$



4. $18 - 17 = \underline{\quad}$



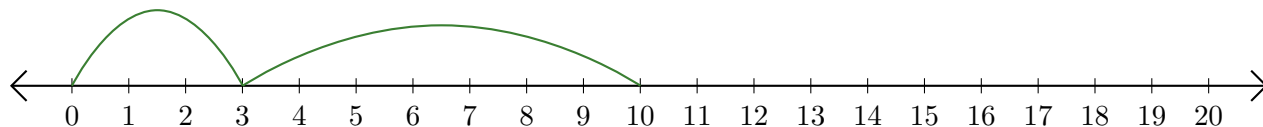
5. $18 - 16 = \underline{\quad}$



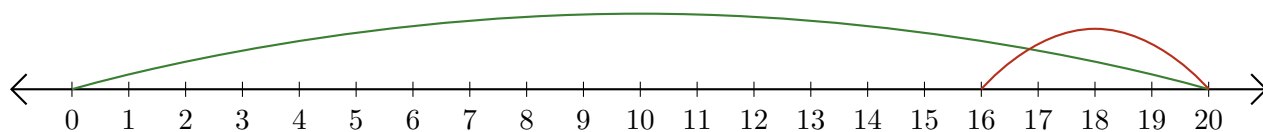
Adding and Subtracting on Number Lines (F) Answers

Use the number lines to calculate each sum or difference.

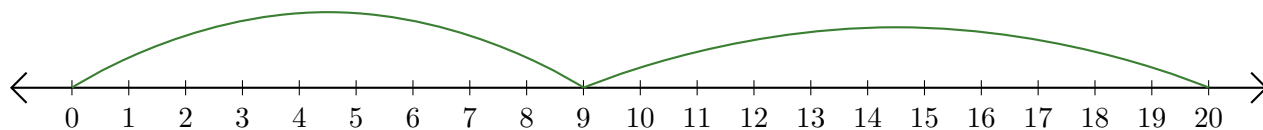
1. $3 + 7 = \underline{10}$



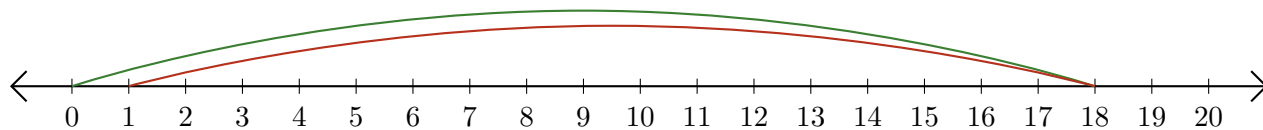
2. $20 - 4 = \underline{16}$



3. $9 + 11 = \underline{20}$



4. $18 - 17 = \underline{1}$



5. $18 - 16 = \underline{2}$

