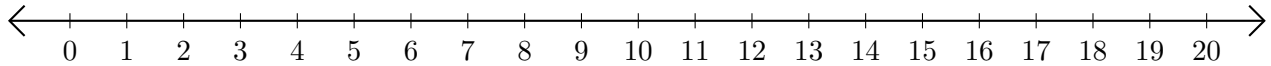


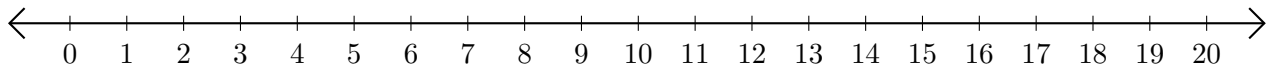
Adding and Subtracting on Number Lines (F)

Use the number lines to calculate each sum or difference.

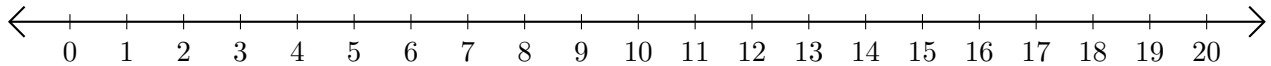
1. $3 + 7 = \underline{\quad}$



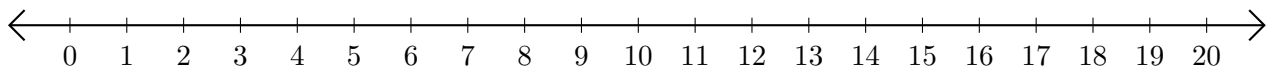
2. $20 - 4 = \underline{\quad}$



3. $9 + 11 = \underline{\quad}$



4. $18 - 17 = \underline{\quad}$



5. $18 - 16 = \underline{\quad}$

