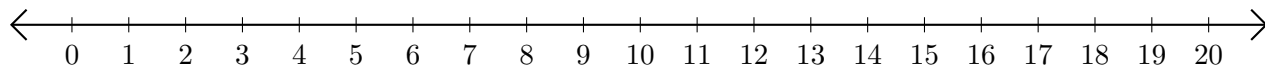


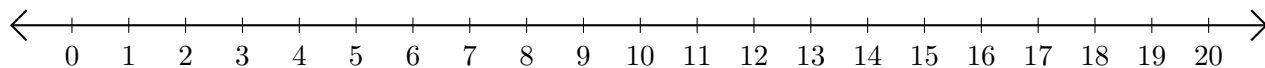
Adding and Subtracting on Number Lines (G)

Use the number lines to calculate each sum or difference.

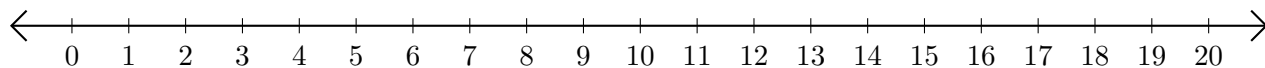
1. $19 + 1 = \underline{\quad}$



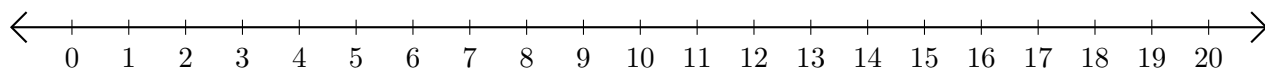
2. $20 - 2 = \underline{\quad}$



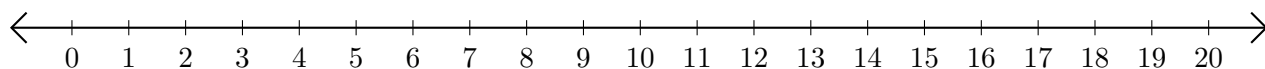
3. $13 + 7 = \underline{\quad}$



4. $11 - 5 = \underline{\quad}$



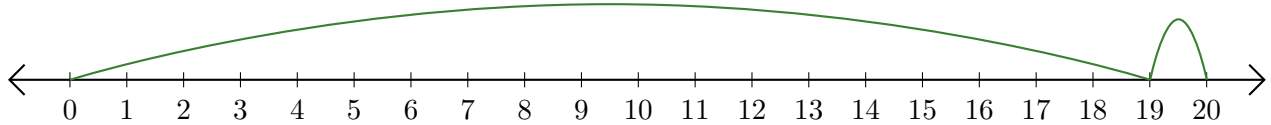
5. $15 + 3 = \underline{\quad}$



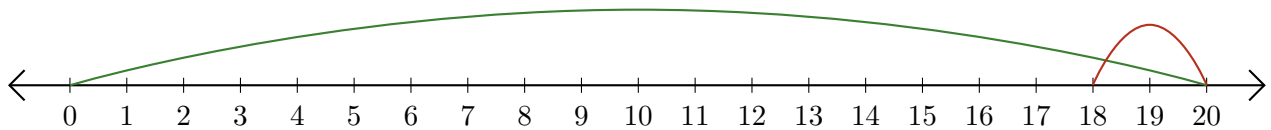
Adding and Subtracting on Number Lines (G) Answers

Use the number lines to calculate each sum or difference.

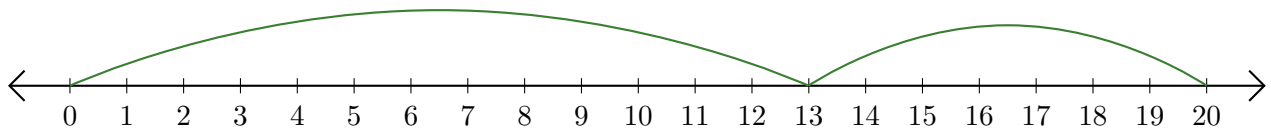
1. $19 + 1 = \underline{20}$



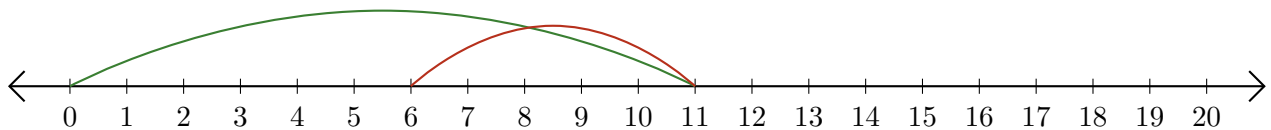
2. $20 - 2 = \underline{18}$



3. $13 + 7 = \underline{20}$



4. $11 - 5 = \underline{6}$



5. $15 + 3 = \underline{18}$

