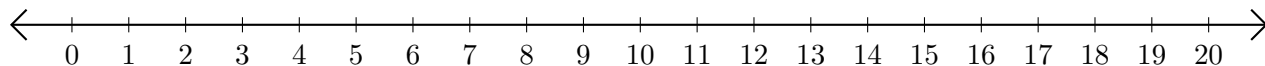


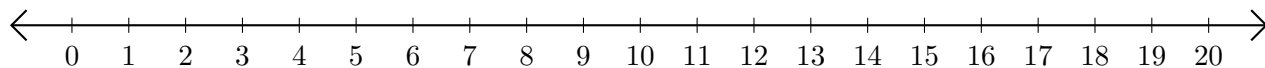
# Adding and Subtracting on Number Lines (G)

Use the number lines to calculate each sum or difference.

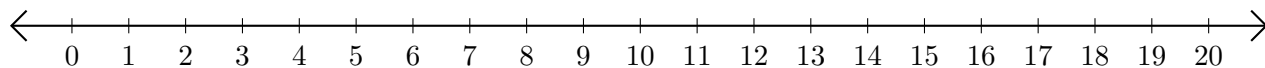
1.  $19 + 1 = \underline{\quad}$



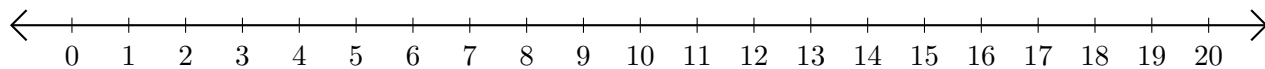
2.  $20 - 2 = \underline{\quad}$



3.  $13 + 7 = \underline{\quad}$



4.  $11 - 5 = \underline{\quad}$



5.  $15 + 3 = \underline{\quad}$

