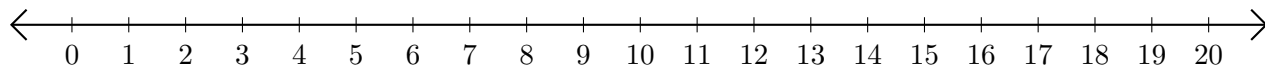


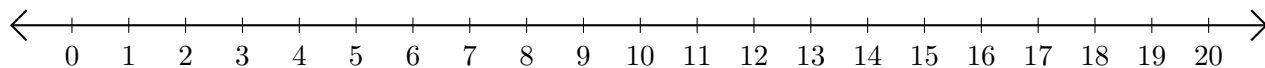
Adding and Subtracting on Number Lines (H)

Use the number lines to calculate each sum or difference.

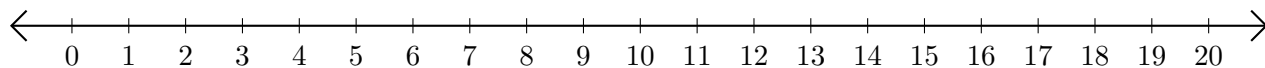
1. $13 + 2 = \underline{\quad}$



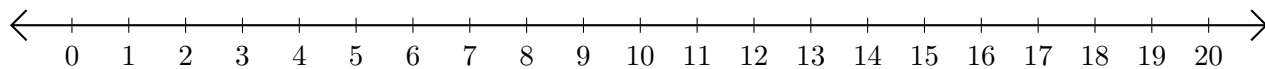
2. $19 - 18 = \underline{\quad}$



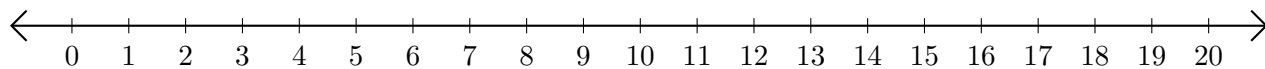
3. $12 + 2 = \underline{\quad}$



4. $12 - 8 = \underline{\quad}$



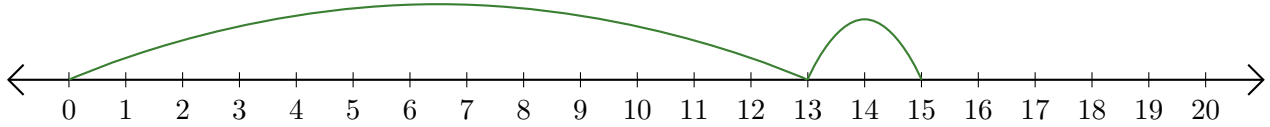
5. $16 + 3 = \underline{\quad}$



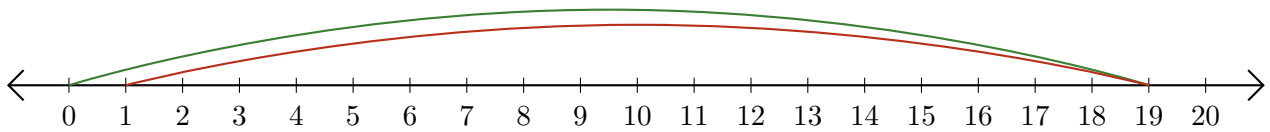
Adding and Subtracting on Number Lines (H) Answers

Use the number lines to calculate each sum or difference.

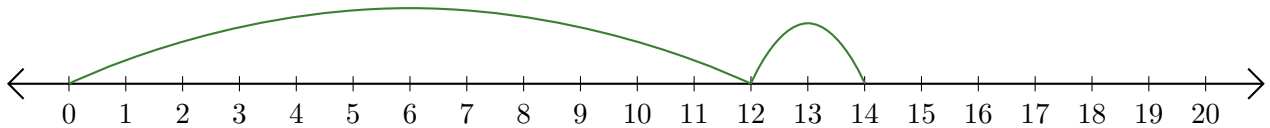
1. $13 + 2 = \underline{15}$



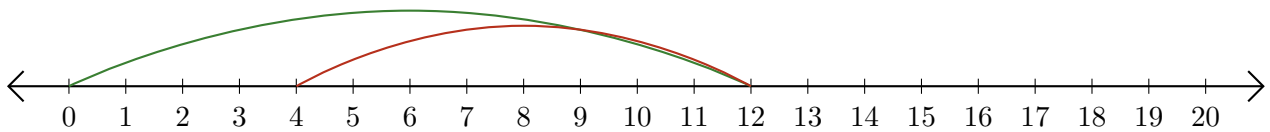
2. $19 - 18 = \underline{1}$



3. $12 + 2 = \underline{14}$



4. $12 - 8 = \underline{4}$



5. $16 + 3 = \underline{19}$

