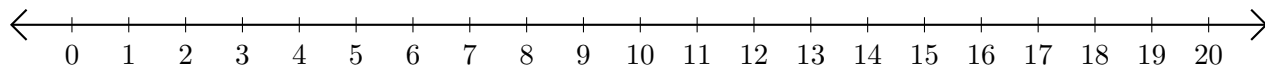


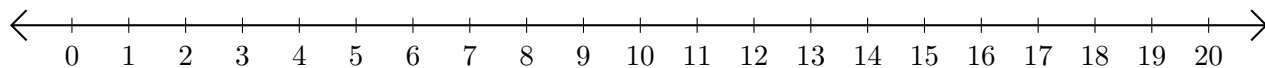
# Adding and Subtracting on Number Lines (H)

Use the number lines to calculate each sum or difference.

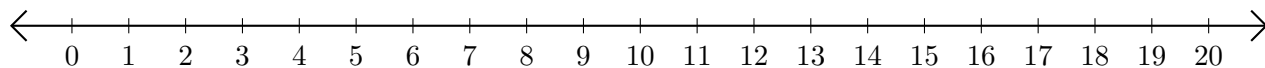
1.  $13 + 2 = \underline{\quad}$



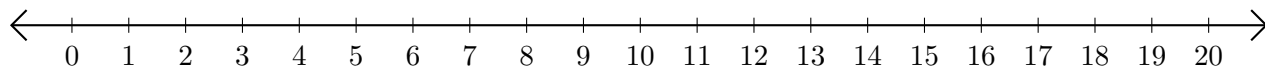
2.  $19 - 18 = \underline{\quad}$



3.  $12 + 2 = \underline{\quad}$



4.  $12 - 8 = \underline{\quad}$



5.  $16 + 3 = \underline{\quad}$

