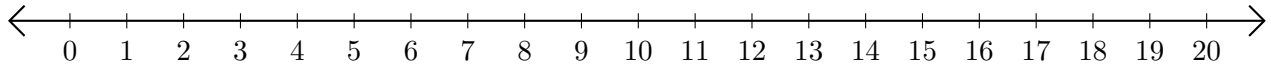


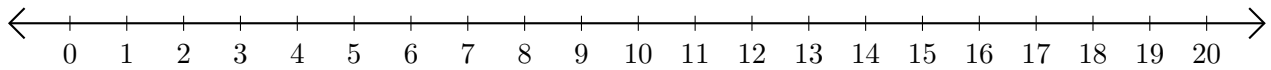
# Adding and Subtracting on Number Lines (I)

Use the number lines to calculate each sum or difference.

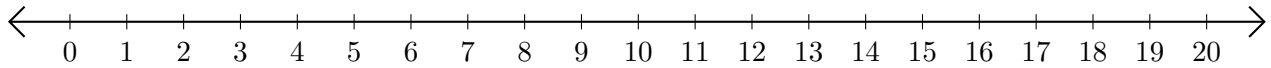
1.  $2 + 2 = \underline{\quad}$



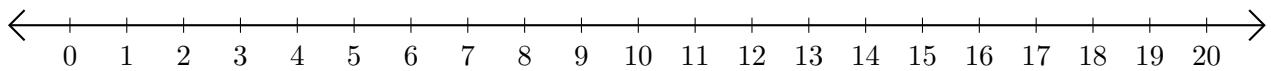
2.  $20 - 19 = \underline{\quad}$



3.  $14 + 6 = \underline{\quad}$



4.  $13 - 4 = \underline{\quad}$



5.  $3 + 15 = \underline{\quad}$

