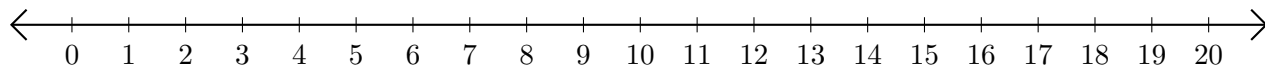


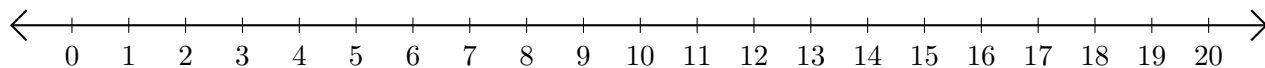
Adding and Subtracting on Number Lines (J)

Use the number lines to calculate each sum or difference.

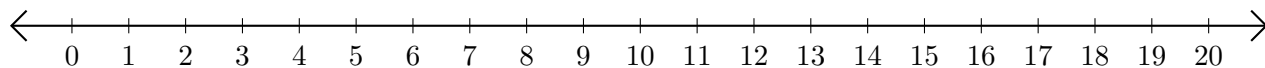
1. $19 + 1 = \underline{\quad}$



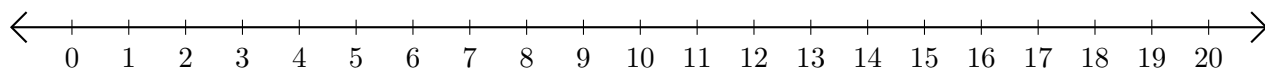
2. $16 - 10 = \underline{\quad}$



3. $11 + 4 = \underline{\quad}$



4. $15 - 12 = \underline{\quad}$



5. $8 + 2 = \underline{\quad}$

