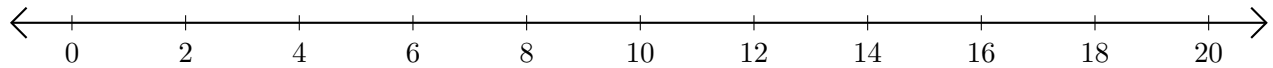


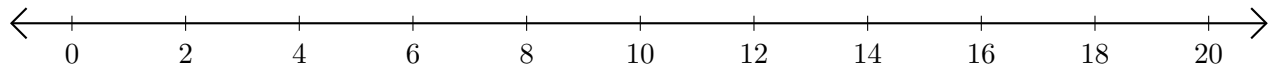
Adding and Subtracting on Number Lines (A)

Use the number lines to calculate each sum or difference.

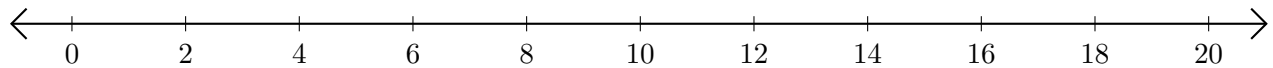
1. $14 + 6 = \underline{\quad}$



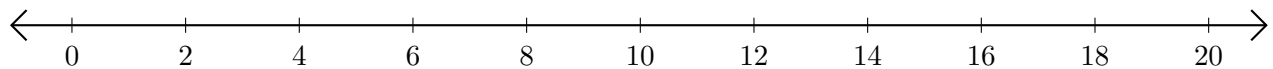
2. $18 - 12 = \underline{\quad}$



3. $18 + 2 = \underline{\quad}$



4. $12 - 8 = \underline{\quad}$



5. $16 + 2 = \underline{\quad}$

