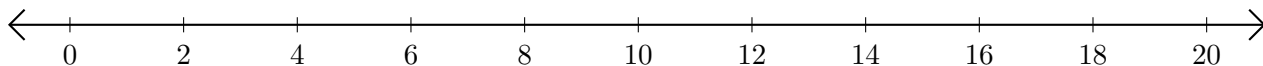


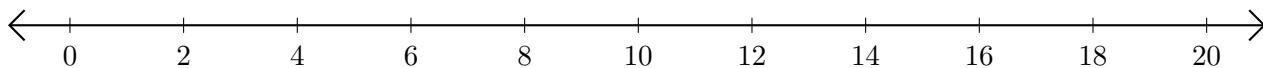
# Adding and Subtracting on Number Lines (B)

Use the number lines to calculate each sum or difference.

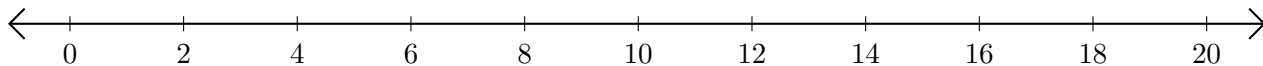
1.  $10 + 8 = \underline{\quad}$



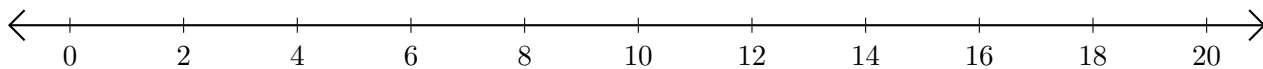
2.  $18 - 14 = \underline{\quad}$



3.  $8 + 4 = \underline{\quad}$



4.  $10 - 6 = \underline{\quad}$



5.  $18 + 2 = \underline{\quad}$

