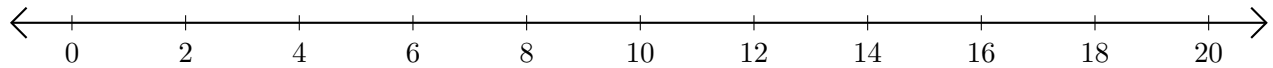


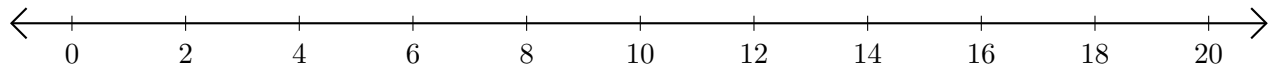
Adding and Subtracting on Number Lines (E)

Use the number lines to calculate each sum or difference.

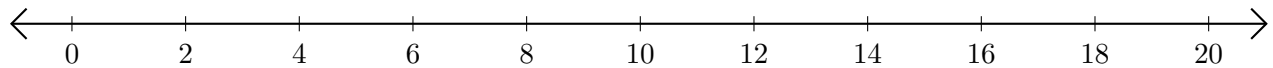
1. $4 + 12 = \underline{\quad}$



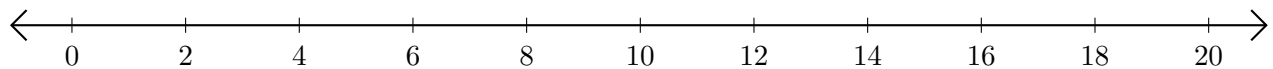
2. $14 - 8 = \underline{\quad}$



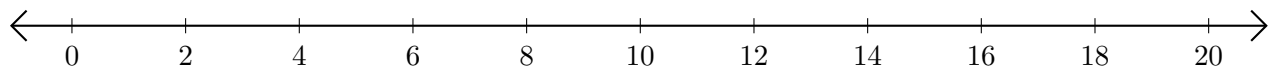
3. $10 + 8 = \underline{\quad}$



4. $18 - 16 = \underline{\quad}$



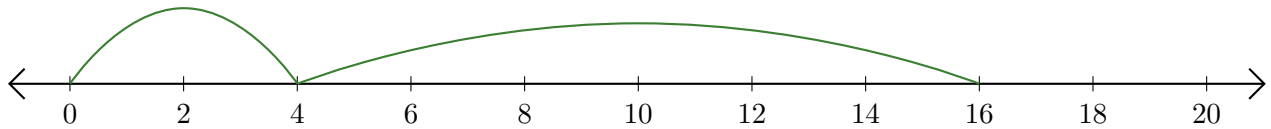
5. $18 + 2 = \underline{\quad}$



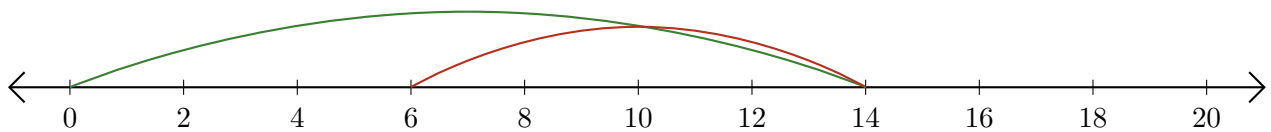
Adding and Subtracting on Number Lines (E) Answers

Use the number lines to calculate each sum or difference.

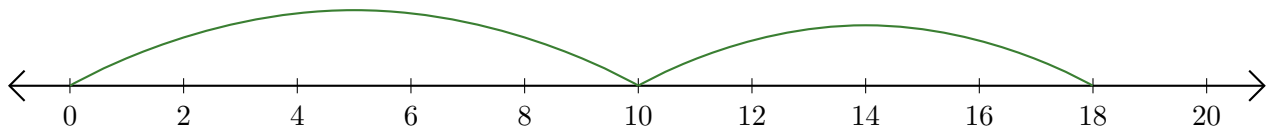
1. $4 + 12 = \underline{16}$



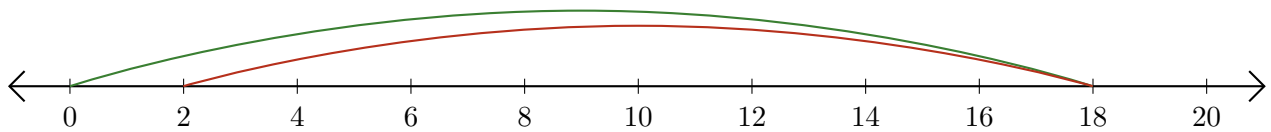
2. $14 - 8 = \underline{6}$



3. $10 + 8 = \underline{18}$



4. $18 - 16 = \underline{2}$



5. $18 + 2 = \underline{20}$

