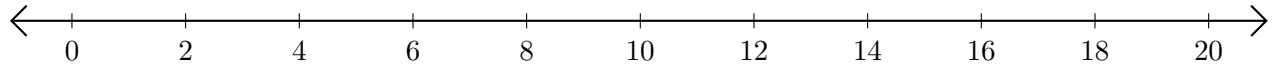


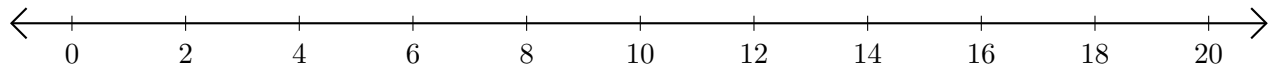
Adding and Subtracting on Number Lines (F)

Use the number lines to calculate each sum or difference.

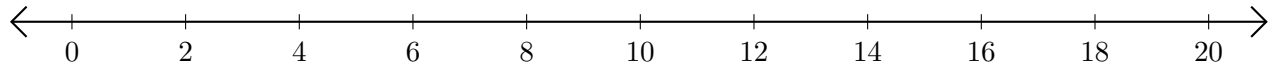
1. $4 + 4 = \underline{\quad}$



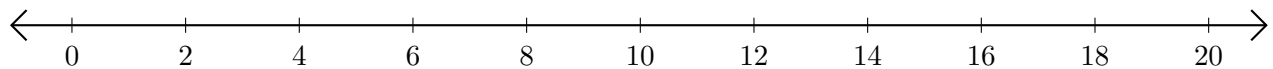
2. $18 - 16 = \underline{\quad}$



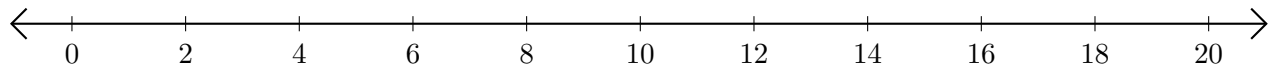
3. $6 + 8 = \underline{\quad}$



4. $12 - 2 = \underline{\quad}$



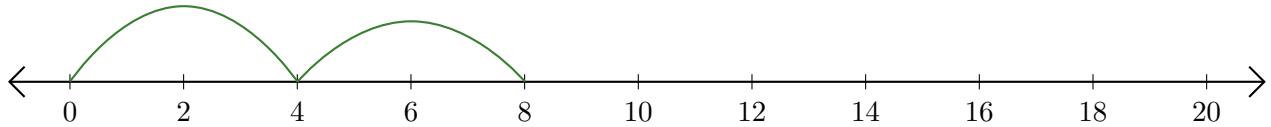
5. $14 + 6 = \underline{\quad}$



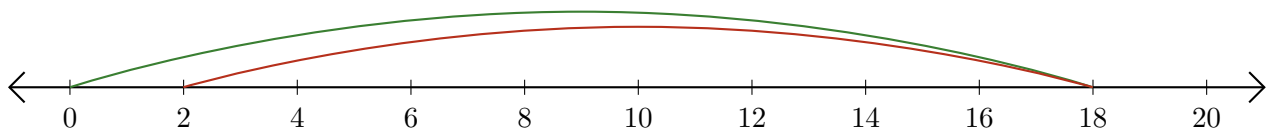
Adding and Subtracting on Number Lines (F) Answers

Use the number lines to calculate each sum or difference.

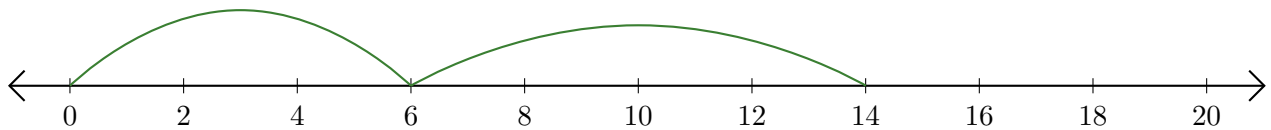
1. $4 + 4 = \underline{8}$



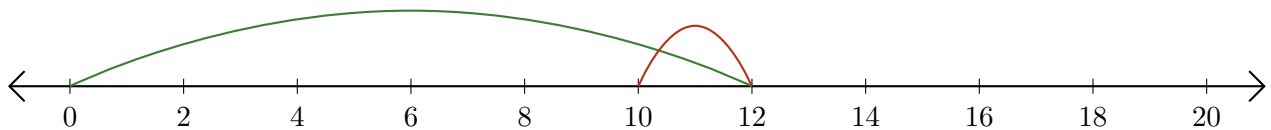
2. $18 - 16 = \underline{2}$



3. $6 + 8 = \underline{14}$



4. $12 - 2 = \underline{10}$



5. $14 + 6 = \underline{20}$

