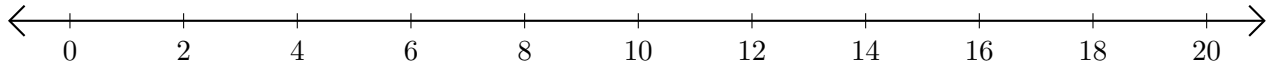


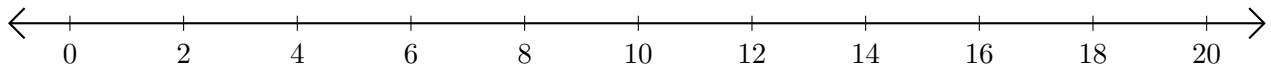
# Adding and Subtracting on Number Lines (F)

Use the number lines to calculate each sum or difference.

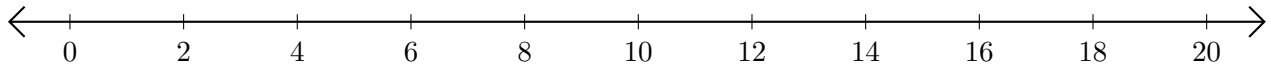
1.  $4 + 4 = \underline{\quad}$



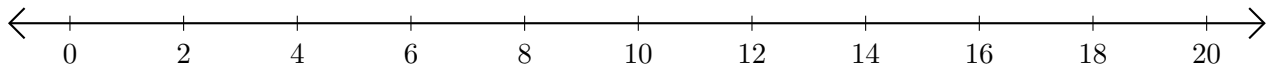
2.  $18 - 16 = \underline{\quad}$



3.  $6 + 8 = \underline{\quad}$



4.  $12 - 2 = \underline{\quad}$



5.  $14 + 6 = \underline{\quad}$

