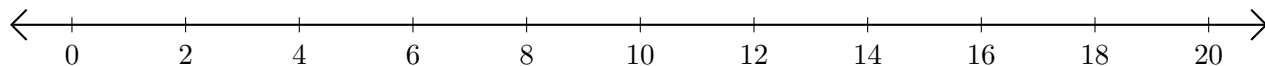


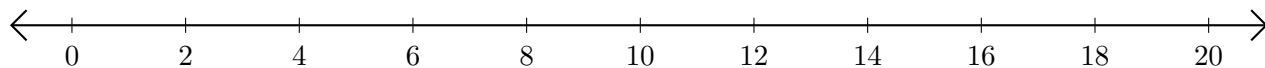
# Adding and Subtracting on Number Lines (G)

Use the number lines to calculate each sum or difference.

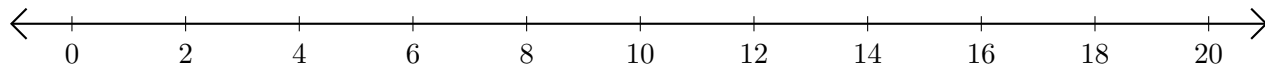
1.  $8 + 6 = \underline{\quad}$



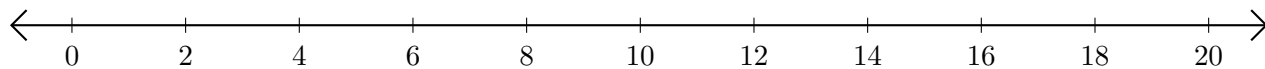
2.  $16 - 10 = \underline{\quad}$



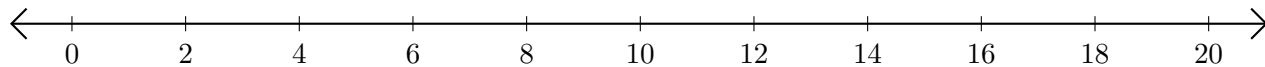
3.  $12 + 8 = \underline{\quad}$



4.  $8 - 4 = \underline{\quad}$



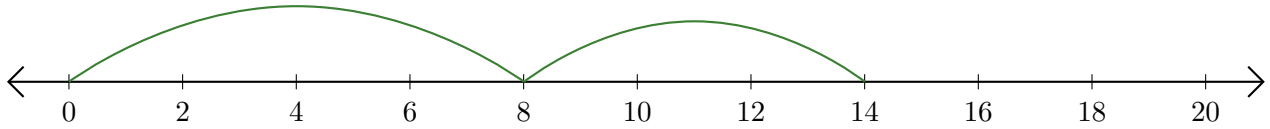
5.  $20 - 18 = \underline{\quad}$



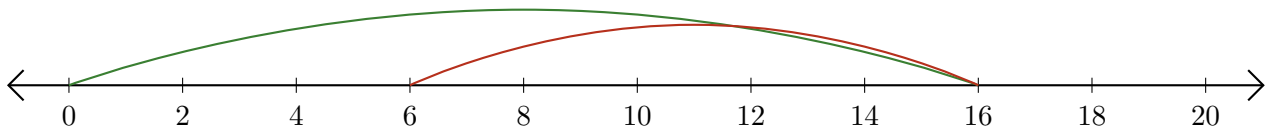
# Adding and Subtracting on Number Lines (G) Answers

Use the number lines to calculate each sum or difference.

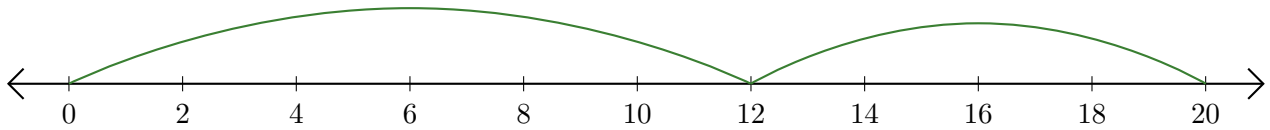
1.  $8 + 6 = \underline{14}$



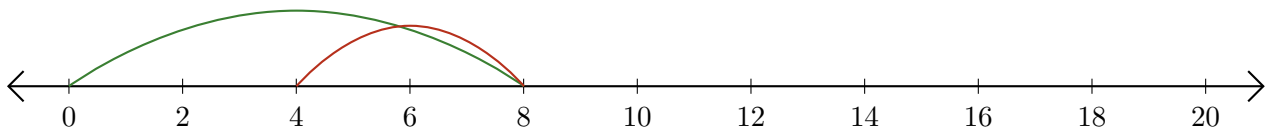
2.  $16 - 10 = \underline{6}$



3.  $12 + 8 = \underline{20}$



4.  $8 - 4 = \underline{4}$



5.  $20 - 18 = \underline{2}$

