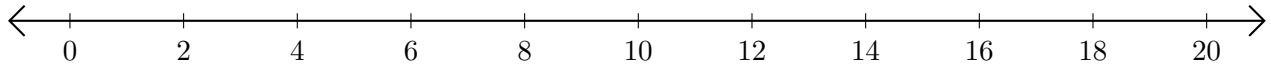


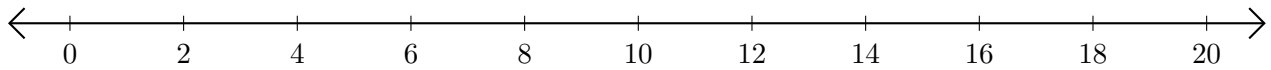
Adding and Subtracting on Number Lines (I)

Use the number lines to calculate each sum or difference.

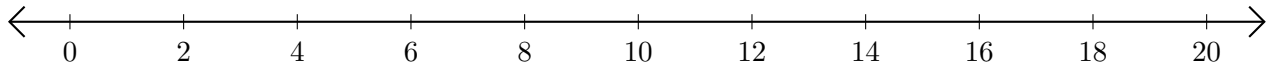
1. $2 + 16 = \underline{\quad}$



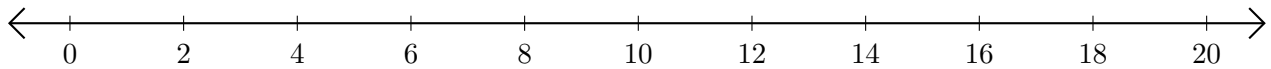
2. $14 - 4 = \underline{\quad}$



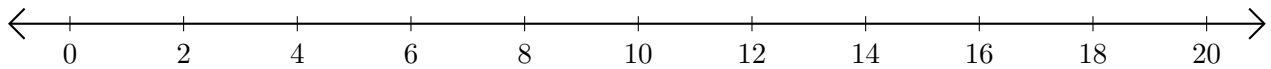
3. $16 + 2 = \underline{\quad}$



4. $16 - 14 = \underline{\quad}$



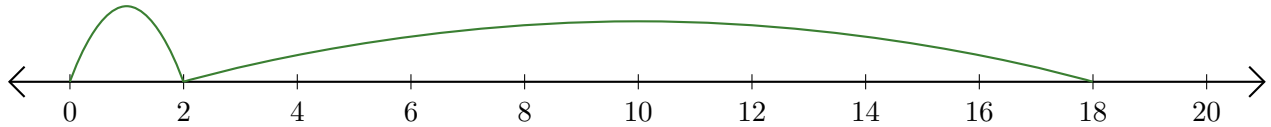
5. $8 + 8 = \underline{\quad}$



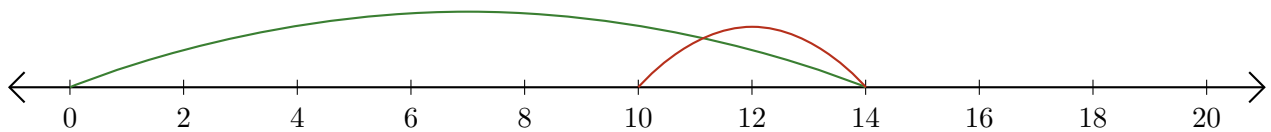
Adding and Subtracting on Number Lines (I) Answers

Use the number lines to calculate each sum or difference.

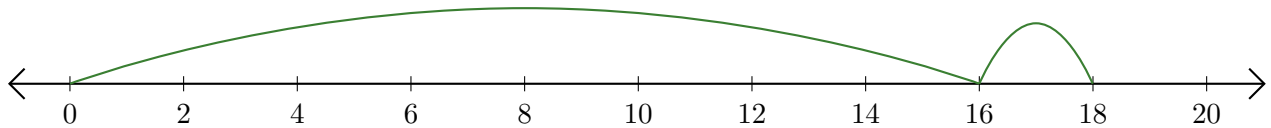
1. $2 + 16 = \underline{18}$



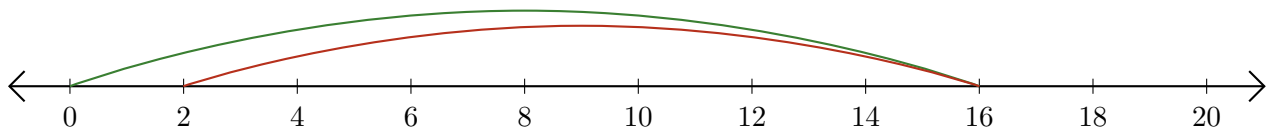
2. $14 - 4 = \underline{10}$



3. $16 + 2 = \underline{18}$



4. $16 - 14 = \underline{2}$



5. $8 + 8 = \underline{16}$

