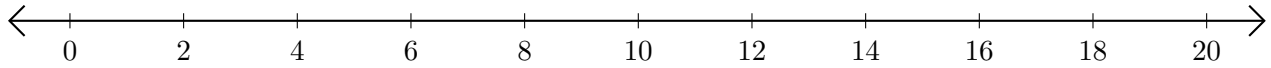


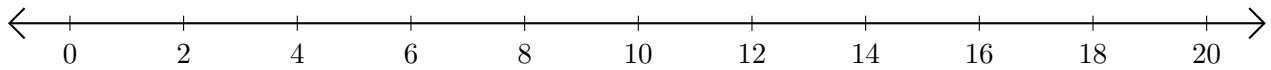
# Adding and Subtracting on Number Lines (I)

Use the number lines to calculate each sum or difference.

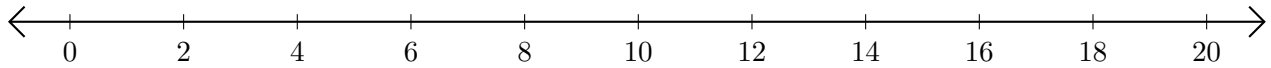
1.  $2 + 16 = \underline{\quad}$



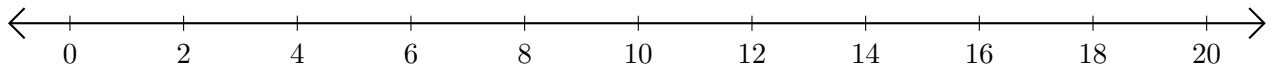
2.  $14 - 4 = \underline{\quad}$



3.  $16 + 2 = \underline{\quad}$



4.  $16 - 14 = \underline{\quad}$



5.  $8 + 8 = \underline{\quad}$

